

SANT NIRANKARI PUBLIC SCHOOL, TILAK NAGAR
ASSIGNMENT (APRIL 2020-21)
SUBJECT: ENGLISH
CLASS-III
TOPIC: SINGULAR AND PLURAL
DAY: 1

1. Circle the:

a) Singular nouns

Friend pens chair cousins men
Dress boxes mango claws leaf

b) Plural nouns

Friend pens chair cousins men
Dress boxes mango claws leaf

2. Place these nouns in the correct columns.

Teeth	cat	hero
	Tooth	life
Feet	children	cities

Singular

Plural

3. Change the singular nouns to plural, and the plural nouns to singular.

Singular

Plural

a) Flower

b) _____

dolls

c) Shelf

d) Fox

e) Roof

f) Cherry

4. Complete the sentences with either the singular or the plural form of the nouns in brackets.

- a) There were many _____ to be washed.(dish)
- b) I ate one _____ in the morning.(banana)
- c) We need six more _____ in this room.(chair)
- d) A yellow _____ is waiting outside the school.(bus)

5. Underline the collective nouns in each sentence.

- 1. A pride of lions attacked the hunters.
- 2. I gave my mother a bouquet of flowers on her birthday.
- 3. My little sister hid the bunch of keys in the closet.

SANT NIRANKARI PUBLIC SCHOOL, TILAK NAGAR
ASSIGNMENT (APRIL 2020-21)
SUBJECT: ENGLISH
CLASS-III
TOPIC: COMMA, SENTENCES
DAY: 2

1. Put commas where needed.
 - a) The school will remain closed on Monday Tuesday Wednesday and Thursday.
 - b) Do you want to study Maths English History or Science?
 - c) The rescue shelter has dog's cat's cows and goats.
 - d) Please get me some carrots beans and tomatoes.
 - e) Apples grapes and mangoes are my favourite fruits.
 - f) The PE teacher made everyone run jog and skip.
 - g) I hate lizard's spiders and frogs.

2. Tick the sentences in which commas have been placed correctly.
 - a) There were balloons, cake and gifts for everyone at the party. _____
 - b) Bobby, Ted, and Mike are going to the fair with me. _____
 - c) We went to the library, the park, and the museum today. _____

3. Rearrange the following words to form meaningful sentences.
 - a) Friends David I and are

 - b) Student Piya a good is

 - c) Belongs Max The to laptop

4. Rearrange the words and add capital letter whereas needed.
 - a) Mangoes I eat like to

 - b) Watching movie She a is

 - c) To going Jack's are house We

SANT NIRANKARI PUBLIC SCHOOL, TILAK NAGAR
ASSIGNMENT (APRIL 2020-21)
SUBJECT: ENGLISH
CLASS-III
TOPIC: NOUNS
DAY: 3

1. Underline the nouns.
 - a) The monkey climbed down and grabbed a banana.
 - b) Mani is waiting for the next train.
 - c) There are two boats sailing on the river.
 - d) The dentist cleaned my teeth this morning.
 - e) I helped Dad wash his car this morning.

2. Underline the nouns in the paragraphs below and place them in the correct columns.
If a word is used more than once, write it only once.

- a) Sara and her cat are in the house. The cat is hungry. Sara gets some milk for the cat from the kitchen. It drinks the milk from its plate. The cat is now sleepy. It falls asleep and dreams of playing with a dog.

People	Place	Animal	Thing

3. Write three nouns that name a place.

4. Write three nouns that name an animal.

5. Write three nouns that name a thing.

SANT NIRANKARI PUBLIC SCHOOL, TILAK NAGAR
ASSIGNMENT (APRIL 2020-21)
SUBJECT: ENGLISH
CLASS-III
TOPIC: NOUN-2
DAY: 4

1. Write C for common noun and P for proper noun.

- | | | |
|---------------------|-------|-------|
| a) Sachin Tendulkar | _____ | _____ |
| b) Mountain | _____ | _____ |
| c) Village | _____ | _____ |
| d) Dancer | _____ | _____ |
| e) Singapore | _____ | _____ |

2. Write a proper noun for each common noun.

- | | |
|--------------|-------|
| a) Planet | _____ |
| b) Sportsman | _____ |
| c) School | _____ |
| d) Month | _____ |
| e) Festival | _____ |

3. Underline the common nouns and circle the proper nouns.

- a) Have you met Priya, my cousin?
- b) Mini is not in the class today.
- c) Ronnie often looks after his little brother.

4. Underline the nouns in this paragraph.

Lily and Rose wanted to surprise their brother, Ron. They ordered a cake for him from the sugar and spice. They also bought a book for his favourite author, Enid Blyton. At last, they went to the Elements Mall with mother and bought a shirt for him.

SANT NIRANKARI PUBLIC SCHOOL, TILAK NAGAR
ASSIGNMENT (APRIL 2020-21)
SUBJECT: ENGLISH
CLASS-III
TOPIC: A, An, The
DAY: 5

1. Fill in the blanks.

- a) A _____
- b) An _____
- c) The _____

2. Fill in the blanks with A, An, or The.

- a) Our office is in _____ old building.
- b) Where is _____ pen I lent to you last week?
- c) I like _____ blue dress more than the red one.
- d) _____ apple a day keeps the doctor away.
- e) There is _____ rainbow in _____ sky.

3. Write "the" where necessary.

- a) _____ New York.
- b) _____ Sun.
- c) _____ China.
- d) _____ Taj Mahal.
- e) _____ India Gate
- f) _____ India.
- g) _____ Ganges.

4. Identify the mistakes and rewrites and rewrite these sentences correctly.

- a) Sally learnt an French word today.

- b) It was a sunny day. A sky was blue.

- c) Have you even been to Himalayas?

d) My brother works in a office. He is an accountant.

SANT NIRANKARI PUBLIC SCHOOL, TILAK NAGAR
ASSIGNMENT (APRIL 2020-21)
SUBJECT: ENGLISH
CLASS-III
TOPIC: ADJECTIVES
DAY: 6

1. Underline the adjectives in these sentences.

- a) Mother wants to buy a round table. _____
- b) David was wearing a long overcoat. _____
- c) I ate three samosas today. _____
- d) Don't touch the red button. _____
- e) Her parents are very strict. _____

2. Choose the correct adjectives to complete these sentences.

- a) Be careful! It's a (blunt/sharp) knife.
- b) She could not enter the house because the door was (locked/open).
- c) Did you see the (old/young) man sitting there? He must be 90 years old.
- d) You failed the test because all your answers were (right/wrong).
- e) Adam wants to buy a (fast/slow) car. He doesn't like slow ones.

3. Complete it.

- a) Strong _____ _____
- b) Difficult _____ _____
- c) Quick _____ _____
- d) Careful _____ _____
- e) Heavy _____ _____
- f) Good _____ _____

4. Compare and form sentences about the animals.

- a) Giraffe/zebra/tall

- b) Elephant/lion/heavy

- c) Dolphin/shark/dangerous

SANT NIRANKARI PUBLIC SCHOOL, TILAK NAGAR
ASSIGNMENT (APRIL 2020-21)
SUBJECT: ENGLISH
CLASS-III
TOPIC: PRONOUNS
DAY: 7

1. Underline the pronouns in these sentences.
 - a) We always watch TV on Sunday evenings.
 - b) Is she the new students?
 - c) Where is Jane? She is not in her room.
 - d) Are you from Kolkata? I wanted to talk to you.
 - e) My dog is not well. It has been sleeping all day.

2. Look at the words in brackets and complete the sentences with pronouns.
 - a) _____ is from Mumbai.(Vani)
 - b) _____ came here on his bicycle.(Tom)
 - c) Do _____ have a computer, Simi?(Simi)
 - d) _____ are playing in the garden.(The children)
 - e) Dr. Arvind gave _____ some strong medicines.(Ravi)

3. Choose the pronouns that can replace the underlined words.
 - a) The teacher always gives the students a lot of homework.
1) Me 2) them 3) you
 - b) Mother is reading my favourite book to me.
1) She 2) He 3) Her
 - c) My family and I Live in London.
1) They 2) We 3) Us
 - d) Meet Anna. She is from Australia.
1) Her 2) it 3) She
 - e) My parents like music. I bought a CD for my parents.
1) Them 2) they 3) us

4. Write a pronoun that can replace the underlined words.
 - a) Sandy threw the ball to Mindy. _____
 - b) Mr and Mrs Gupta got married last year. _____
 - c) The teacher is looking at Mike and me. _____
 - d) My brother and I want to have a pet. _____
 - e) My aunt is a Maths teacher. _____

SANT NIRANKARI PUBLIC SCHOOL, TILAK NAGAR
ASSIGNMENT (APRIL 2020-21)
SUBJECT: ENGLISH
CLASS-III
TOPIC: IS, ARE, AM
DAY: 8

1. Complete these sentences using is, am, or are.

- a) I _____ at Grandma's house.
- b) My father _____ at work now.
- c) My mother and my sister _____ in Spain.
- d) Ritu and Mitu _____ identical twins.
- e) Shalini and I _____ going to study together.

2. Arrange the words in the correct order and write sentences,

- a) Are/they/Canada/from.

- b) Tourist/he/a/is.

- c) Grandpa/my/is/60.

- d) Best friend/you/my/are.

- e) Happy/very/am/today/I.

3. Choose the correct options.

- a) Alisha (is cooking/are cooking) Italian food.
- b) Aunt Maya (am looking/is looking) for Mum and Dad.
- c) My mother and father (is waving/are waving) to me.
- d) My brother and I (am swimming/are swimming) in the pool.

4. Fill in the blanks with is, are, am form of the verb in brackets.

- a) Max _____ a big mistake.(make)
- b) They _____ to Mumbai today.(fly)

- c) Someone _____ at the door.(knock)
- d) I _____ ready for school.(get)
- e) We _____ fruits at the market.(buy)

5. Choose the correct options.

- a) The (child/children) are riding their bicycles.
- b) (He/They) is eating a lot of junk these days.
- c) (I/You) are doing great work.
- d) (I/She) am waiting for you in the car.

_____ _____ _____ _____
4. Read the pair of words provided and use a dictionary to write two other words that will come between them.

a) Bowl _____ _____ butterfly

b) Rain _____ _____ rent

c) Mango _____ _____ melon

SANT NIRANKARI PUBLIC SCHOOL, TILAK NAGAR
ASSIGNMENT (APRIL 2020-21)
SUBJECT: ENGLISH
CLASS-III
TOPIC: SIMPLE PRESENT TENSE
DAY: 10

1. Underline the verbs in simple present tense in these sentences.
 - a) Tom cleans his room every Saturday.
 - b) Suzy likes to eat fish and eggs.
 - c) My cousin dances very well.
 - d) Millions of fish live in the sea.
 - e) Sara always listens to nice songs.

2. Add –s to these verbs.
 - a) Take
 - b) Buy
 - c) Swim
 - d) Play
 - e) Live
 - f) Eat
 - g) Choose
 - h) Give

3. Add –es to these verbs.
 - a) Teach
 - b) Catch
 - c) Match
 - d) Brush
 - e) Pass
 - f) Watch
 - g) Go

4. Complete this sentences with the correct forms of the verbs in brackets.

My Aunt Martha is a teacher. She _____(teach) English and Geography. She _____(stay) in Kolkata. She _____(love) animals, but doesn't have a pet because she _____(live) in a small apartment. Every year, I _____(stay) with her for a few days. I _____(live) and _____(study) in New Delhi,

but I _____(spend) my summer break with Aunt Martha. I _____(enjoy) the shopping and the sightseeing.

5. Rewrite these sentences using the new subject given in the brackets. Change the verb as required.

a) I go home at 3'o clock.(she)

b) My sister practise yoga every morning.(we)

c) Mary usually watches TV in the evening.(I)

SANT NIRANKARI PUBLIC SCHOOL TILAK NAGAR
ASSIGNMENT- 1 (APRIL 2020-21)
SUBJECT – EVS
CLASS-III
L-1

1. Name two animals:
 - a) Can Fly
 - b) Can Crawl
 - c) Can Walk
 - d) Have Wings
 - e) Have Tail

2. Guess who am I (Birds):
 - a) I have beautiful feathers.
 - b) I fly very high and I eat mice.
 - c) I am green colour and I copy you.
 - d) I have sweet voice-koohu koohu.

3. Name some pet animals.

4. Match:

a) Cow	i) gives us honey
b) Dog	ii) pulls the cart
c) Horse	iii) guards our horse
d) Honey bee	iv) gives us milk

5. I am the national bird of India.

6. I am the national animal of India.

7. Which animal eat other animal:
 - a) Goat, Horse, Lion, Cow.

SANT NIRANKARI PUBLIC SCHOOL TILAK NAGAR
ASSIGNMENT- 2 (APRIL 2020-21)

SUBJECT – EVS

CLASS-III

L-1

1. Guess who am I?
 - a) My Beak is very sharp, I stitch leaf with it to make home _____.
 - b) I eat dead animals to make places clean, I can fly high _____.
 - c) I remain active at night, I can rotate my neck backwards to a great extent _____.

2. Name two?
 - a) Birds that fly low _____
 - b) Birds that cannot fly _____
 - c) Birds that fly high _____

3. Name the place of living of these animals:
 - a) Dog
 - b) Horse
 - c) Lion

4. How the following animals useful:
 - a) Goat
 - b) Cow
 - c) Sheep
 - d) Dog

5. Write two animals which:
 - a) Live on land and water.
 - b) Eat only plant/leaves.
 - c) Live on land.

SANT NIRANKARI PUBLIC SCHOOL TILAK NAGAR
ASSIGNMENT- 4 (APRIL 2020-21)
SUBJECT – EVS
CLASS-III
L-2

1. Name two trees with:-

- a) Thick trunk _____, _____
- b) Thin trunk _____, _____

2. Write names of some objects which have patterns of leaves and flowers on them in your house. (E.g. bed sheet, curtains, tray, etc.)

3. Which one is a medicinal plant?

- a. Tulsi
- b. Neem
- c. Pudina
- d. All of these

4. Name some leaves which give strong aroma/which you can recognize by crushing and smelling. _____, _____, _____.

5. Name two plants which have

- a) Small leaves _____, _____
- b) Long leaves _____, _____
- c) Big and flat leaves _____, _____

6. I am the National flower of India- _____

SANT NIRANKARI PUBLIC SCHOOL TILAK NAGAR
ASSIGNMENT- 5 (APRIL 2020-21)
SUBJECT – EVS
CLASS-III
L-2

1. Name the trees or plants which give us:
 - a) Medicine
 - b) Perfume
 - c) Fruit
 - d) Oil

2. Name the following:
 - a) Two big trees
 - b) Two plants with soft stem.

3. Give one word for the answer:
 - a) I am a beautiful part of the plant.
 - b) I am the part of a fruit from which a baby plant grows.
 - c) I am green in colour and I make food for the plant.

4. Write the names of the leaves and write in column:

Rose, Mint, Cactus, mango, Tulsi, Grapes, Papaya, Pineapple

Leaf with Thorns

Leaf with straight Margin

Leaf with uneven Margin

5. Identify the plant or tree as Creeper, Climber, Shrubs, Herbs, Desert, and Mountain.


Cactus, Pumpkin, Greens, Date Palm, Grass, Deodar, Cucumber, Lady Finger

SANT NIRANKARI PUBLIC SCHOOL TILAK NAGAR
ASSIGNMENT- 6 (APRIL 2020-21)
SUBJECT – EVS
CLASS-III
L-1,2


1. The teacher can ask students to make designs and motifs (patterns) using different objects like capsicum, ladyfinger, onion etc. (Activity based – can be done in scrap-book / drawing sheet).



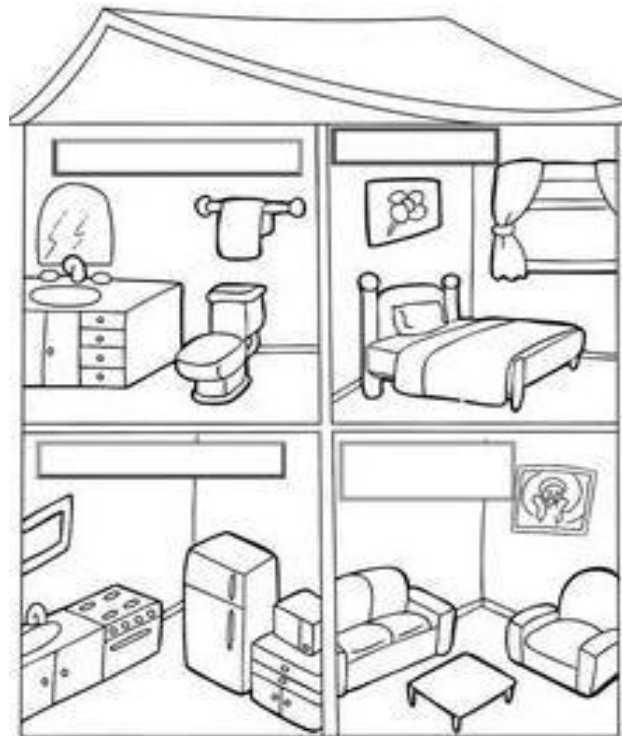
2. Make different designs / objects (like birds, butterfly, tree, rat, spider, flower, tree etc.) using thumb painting.



3. Making different designs / drawings using your hands / feet (with the help of water colours):-



4. Label the different sections of home in the picture given below:-



5. Match the column A with column B :-

Column A

- a) Place where you sleep
- b) Place where your mother cooks
- c) Place where you eat
- d) Place where you take bath
- e) Place where you study
- f) Place where guests sit

Column B

- Kitchen
- Bedroom
- Study Area
- Drawing Room
- Bathroom
- Dining Area



SANT NIRANKARI PUBLIC SCHOOL TILAK NAGAR
ASSIGNMENT- 7 (APRIL 2020-21)
SUBJECT – EVS
CLASS-III
L-3

1. Circle the sources of water given in the grid:-

R	I	V	E	R	Z
X	M	C	A	O	L
L	R	V	T	A	P
A	A	W	E	L	L
K	I	T	L	E	J
E	N	P	O	N	P

2. Tick the food items that you have in your mid-day meal:-

Dal Burger Chapati Dalia

 Egg Noodles Parantha

Maggie Rice Kheer Pulao Kadi

3. How does your mother cook food? (on gas, stove, heater etc.)

4. We need food because :-

- a) it gives us energy
- b) it helps us to grow and to develop
- c) it makes us healthy
- d) all of the above

5. Underline the activities for which you need water:-

writing

bathing

sleeping

cooking

playing

washing

drinking

driving car/cycle

swimming

SANT NIRANKARI PUBLIC SCHOOL TILAK NAGAR
ASSIGNMENT- 8 (APRIL 2020-21)
SUBJECT – EVS
CLASS-III
L-3

1. Name 3 different sources of water.

2. Pick the odd one out:

- a) Bucket Jug Book
- b) Cooking Bathing Sleeping
- c) Boat ship Car

3. List three activities which make the water dirty?

4. Match:

- | | |
|-------------------------------|---------|
| a) Huge source of salty water | Drought |
| b) No rain causes | Flood |
| c) To much rain causes | sea |

5. Draw, name and colour two sources of drinking water?

SANT NIRANKARI PUBLIC SCHOOL TILAK NAGAR
ASSIGNMENT- 9 (APRIL 2020-21)
SUBJECT – EVS
CLASS-III
L-3

1. Which needs more water? Circle the correct answer?
a) Making tea having bath
b) Cleaning house cooking
2. How many mugs of water are there in a bucket full of water?(Estimate).
3. How many spoons of water are there in a glass of water?(Estimate).
4. List 2 activities that your mother does in the kitchen of water?

5. Name 5 activities which you cannot do without water?

6. Fill ups :

- a) _____ is the solid form of water.
- b) _____ is the purest form of water.
- c) Always _____ your hands before eating food.

SANT NIRANKARI PUBLIC SCHOOL TILAK NAGAR
ASSIGNMENT- 10 (APRIL 2020-21)
SUBJECT – EVS
CLASS-III
L-1,2,3

1. Name the following.
 - a) Two plants whose roots are eaten.
 - b) Two plants whose leaves are eaten.
2. Draw, Name and Colour objects that have pattern of flowers or leaves on them?
3. Draw a plant and label the parts of plants.
4. Name the 3 forms of water.

5. Name 2 Rivers.

6. Write 2 uses of water.

वचन

अनेकवचन शब्द लिखें

एकवचन

पत्ता



अनेकवचन

शिक्षिका



बच्चा



चूड़ी



थाली



बोतल

सितली

वचन

इन शब्दों के एकवचन और बहुवचन को सही जोड़े बनाकर लिखें-

जूता	एकवचन	बहुवचन
पौधा	_____	_____
चूड़ियाँ	_____	_____
जूते	_____	_____
डिब्बा	_____	_____
पौधे	_____	_____
कुर्सियाँ	_____	_____
डिब्बे	_____	_____
चूड़ी	_____	_____
तसवीर	_____	_____
पंक्तियाँ	_____	_____
तसवीरें	_____	_____

कुर्सी
पक्षी



विराम चिह्न

प्रश्न:-१ निम्नलिखित विराम-चिह्नों के सामने उचित चिह्न लगाते हुए एक-एक वाक्य लिखिए

- i) अल्पविराम-चिह्न -----
- ii) अर्धविराम-चिह्न -----
- iii) अपूर्णविराम-चिह्न -----
- iv) प्रश्नसूचक-चिह्न -----
- v) विस्मयादिसूचक-चिह्न -----
- vi) उद्धरण-चिह्न -----
- vii) योजक-चिह्न -----
- viii) लाघव-चिह्न -----

प्रश्न:-२ निम्नलिखित वाक्य में उचित विराम चिह्न लगाते हुए वाक्य को फिर से लिखिए-

- i) आँवला पीपल केला बेर तथा तुलसी आदि वृक्षों की पूजा की जाती है
- ii) भाषा मणि हमारी पाठ्यपुस्तक है
- iii) अमरीका को स्वतंत्रता कैसे मिली
- iv) अरे बाबा डा सुखदेव ही आ रहे है
- v) संदीप जी ने कहा हिंदी राष्ट्रीयता के लिए जरूरी नहीं है

प्रश्न:-३ विराम चिह्न किसे कहते हैं? उदाहरण सहित समझाए।

PRACTICE WORKSHEET

Name : _____ Roll No. : _____

Class : _____ Date : _____

क्रिया

जो शब्द किसी काम के करने या होने का बोध कराएँ
उन्हें क्रिया कहते हैं।

नीचे लिखे वाक्यों में क्रिया शब्दों पर गोला लगाइए—

1. मैं खाता बना रही हूँ।
2. राजू रोद से खेलता है।
3. पत्ता सम्भार पढ़ रहे हैं।
4. बगीचे में फूल खिले हैं।
5. मानी ने परिष्कृत की कहानी सुनाई।
6. आसमान में छारे घन्क रहे हैं।
7. सूरज पृथ्वी से निकलता है।
8. हम दादी के घर जायेंगे।
9. हमें सदा सच बोलना चाहिए।
10. मैं लीसले कक्षा में पढ़ता हूँ।

लिंग

रेखांकित शब्दों के लिंग बदलकर वाक्य दोबारा लिखें

क-मोर बाग में नाच रहा है।

ख-नीकरानी आज नहीं आयेगी।

ग-दादाजी पिंकी को बाग में लेकर ग

घ-लड़कियाँ स्कूल जा रही हैं।

च-बालक हँस रहा है।

लिंग

रेखांकित छपे शब्दों के लिंग बदलकर वाक्य दोबारा लिखे

क-पापा मुझे बहुत प्यार करते हैं।

ख-शेर ने हिरन का शिकार किया।

ग-मामा ने गौरी के लिए मिठाई लायी।

घ-दादाजी पीछी को पानी दे रहे हैं।

च-शिक्षक स्कूल में पढ़ा रहे हैं।

Name : _____ Roll No. : _____

Class : _____ Date : _____

अनेक शब्दों के लिए एक शब्द

1. जानने की इच्छा रखने वाला _____
2. जहाँ जाना कठिन हो _____
3. जहाँ जाना आसान हो _____
4. नीचे लिखा गया हो _____
5. जिसे मोक्ष प्राप्त करने की इच्छा हो _____
6. सौ का समूह _____
7. आलोचना करने वाला _____
8. दस वर्षों का समूह _____
9. लंबी उम्र वाला _____

हिंदी

समान अर्थवाले शब्द लिखें

वृक्ष - _____



सूर्य - _____

चिड़िया - _____



दुनिया - _____



कथा - _____

पुष्प - _____



बालक - _____



समान अर्थवाले शब्द लिखें

पानी - _____

उपवन - _____

तीर - _____

बादल - _____

वन - _____

शेर - _____

पवन - _____



हिंदी

उलटे अर्थवाले शब्द लिखें

दाएँ × _____

चतुर × _____

लाभ × _____

खुशबुदार × _____

सफलता × _____

भारी × _____

दिन × _____




PRACTICE WORKSHEET

Name : _____ Roll No : _____

Class : _____ Date : _____

विलोम शब्द

उल्टे अर्थ बताने वाले शब्दों को विलोम शब्द कहते हैं।



छोटा



बड़ा

सही विलोम शब्द पर चिह्न लगाइए—

- 1) सच - सत्य झूठ अंधा
- 2) मुश्किल - आसान नरम बल्लिन
- 3) अपना - अपना दूसरा पराया
- 4) सफलता - विनाश असफलता सफल
- 5) स्वर्ग - नरक परलोक देवलोका

जोड़े मिलाइए—

- 1) सुबह असम्य
- 2) सम्य राम
- 3) उभित रोना
- 4) उन्धी अनुभित
- 5) हैसना धीरे

संज्ञा

नीचे लिखे वाक्यों में से संज्ञा शब्द रेखांकित करें-

क-शीमा खाना खा रही है।



ख-रमेश पतंग उड़ा रहा है।



ग-राधा सुंदर गाली है।

घ-मछली तालाब में तैर रही है।



च-कोयल गाना गा रही है।

छ-किसान खेत में काम कर रहा है।

Name : _____ Roll No. : _____

Class : _____ Date : _____

संज्ञा अभ्यास

चित्र देखकर संज्ञा से खाली स्थान भरिए—



1. कविता ने आसमान में _____ उड़ा दिए।
2. पिताजी बाजार से _____ लाए हैं।
3. फूलों पर _____ बैठी हैं।
4. _____ जंगल का राजा है।
5. मोहन का _____ बड़ा है।
6. _____ बहुत ही सुंदर पक्षी है।
7. यह चित्र वीरांगना _____ का है।
8. बाग में _____ खेल रहे हैं।

विशेषण

सहा या सर्वनाम की विशेषता बताने वाले शब्दों को विशेषण कहते हैं।

प्र०1 विशेषण शब्दों को रेखांकित कीजिए—

- क) राधा ने लाल चूड़ियाँ पहनी हैं।
- ख) मेहा एक शांत लड़की है।
- ग) वह होशियार बालक है।
- घ) शीतल के बाल लंबे हैं।

प्र०2 खाली स्थान में उचित विशेषण शब्द लिखिए—

(सुंदर, स्वादिष्ट, पुरानी, बड़ा)

- क) मौजन बहुत _____ था।
- ख) गाँव में उनका एक _____ मकान है।
- ग) मेरी मम्मी _____ है।
- घ) रोहन की _____ कमीज उसे दे देना।

प्र०3 जोड़ें मिलाइए—

- क) काले फूल

सर्वनाम

संज्ञा के स्थान पर प्रयोग किए जाने वाले शब्दों को सर्वनाम कहते हैं।

प्र०1 खाली स्थान में उचित सर्वनाम शब्द लिखिए -

- क) दरवाजा खोला, शायद _____ आया है। (कुछ/कोई)
- ख) _____ गाना नहीं आता। (तुम्हें/मेरे)
- ग) वही _____ बेटा है? (कौन/क्या)
- घ) _____ मेरी घड़ी है। (यह/ये)
- ङ) मुझे खाने के लिए _____ चाहिए। (कुछ/कोई)

प्र०2 नीचे लिखी वाक्यों में रेखांकित सर्वनाम शब्द किसके लिए आया है? बताइए-

क) शिवाजी ने पेंटिल देखकर कहा - भाई, इसे दिखाना।

पेंटिल के लिए

ख) शीतल ने रोहन से कहा - तुम क्या कर रहे हो?

_____ के लिए

ग) बिल्ली ने दूध मिया और वह वही से माग गई।

_____ के लिए

घ) मरुता ने बेटे से कहा - मैं तुम्हारे लिए कपड़े लाई हूँ।

SANT NIRANKARI PUBLIC SCHOOL TILAK NAGAR
ASSIGNMENT
SUBJECT – MATHS
CLASS-III
TOPIC –NUMBERS
DAY -1

Q1) Fill the missing numbers.

1. 10 ___ 30 ___ ___ 60
2. 20 30 ___ ___ 60 ___
3. 40 ___ ___ 70 ___ 90
4. 5 10 ___ ___ 25 ___
5. 10 ___ 20 ___ 30 ___ 40

Q2) Write the number names.

1. 175
2. 93
3. 45
4. 123
5. 200

Q3) Write the numerals for the following.

1. Four hundred eight nine
2. Five hundred fifty five
3. Six hundred

Q4) Put the Signs ,<,>=.

128 178

100 105

162 112

Q5) Write the successor of 99.

Q6) Write the predecessor of 50.

Q7) Write the smallest 4 digit number.

Q8) write the number in roman form

a) 50

b) 10

SANT NIRANKARI PUBLIC SCHOOL TILAK NAGAR
ASSIGNMENT
SUBJECT – MATHS
CLASS-III
TOPIC –FRACTIONS
DAY -2

1. Draw a number line and circle the fraction .

a) $\frac{1}{4}$

b) $\frac{6}{7}$

c) $\frac{3}{5}$

2. Identify the pairs of like and unlike fraction

a) $\frac{4}{5}$, $\frac{6}{9}$

b) $\frac{13}{15}$, $\frac{12}{15}$, $\frac{12}{15}$

c) $\frac{1}{8}$, $\frac{1}{6}$, $\frac{1}{3}$

3. Arrange in increasing order:

a) $\frac{3}{5}$, $\frac{1}{5}$, $\frac{4}{5}$

b) $\frac{3}{7}$, $\frac{6}{7}$, $\frac{2}{7}$

4. Add by using number line

a) $\frac{3}{7} + \frac{1}{7}$

b) $\frac{5}{10} + \frac{1}{10} + \frac{2}{10}$

c) $\frac{1}{4} + \frac{2}{4}$

5. Subtract by using number line

a) $\frac{4}{5} - \frac{3}{5}$

b) $\frac{3}{7} - \frac{2}{7}$

c) $1 - \frac{2}{8}$

6. Seema and Aditi ate $\frac{3}{11}$ and $\frac{4}{11}$ of the sweets, what fraction of the sweets did they eat

Altogether?

7. $\frac{2}{5}$ of a circle is shaded, what fraction of the circle is not shaded

SANT NIRANKARI PUBLIC SCHOOL TILAK NAGAR
ASSIGNMENT
SUBJECT – MATHS
CLASS-III
TOPIC –NUMBERS, ADDITION
DAY -3

Q-1, Write the number names

- a) 4683
- b) 9807

Q-2, Express each number in expanded form

- a) 8008
- b) 6799

Q-3. Write the number in ascending and descending order

- a) 4568 , 7984 , 5200 , 5206 , 7354

Q-4, Form the greatest and smallest 4 digit number using the given digit

- a) 4 , 5 , 2 , 0
- b) 6 , 7 , 2 , 4

Q-5, Write all the even numbers between two numbers

- a) 1046 -> _____ -> _____ -> _____ -> 1054

Q-6, Write the predecessor and the successor of the numbers

- a) _____ - 3130 - _____
- b) _____ - 7172 - _____

Q-7, Round off two nearest tens

- a) 17
- b) 88

Q-8 , Round off two nearest thousand

- a) 5325
- b) 3901

Q-9, Write the roman numerals

- a) 14
- b) 23

c) 43

Q-10, Find the sum of given numbers

a) 3632 and 5576

b) 1053 and 3564

Q-11, Add the following by breaking up the numbers

a) $204 + 7$

b) $663 + 10$

c) $4120 + 400$

Q-12, Estimate each sum to nearest thousand also find the actual sum

a) $7127 + 1654$

b) $6217 + 1523$

SANT NIRANKARI PUBLIC SCHOOL TILAK NAGAR
ASSIGNMENT
SUBJECT – MATHS
CLASS-III
TOPIC –ADDITION
DAY -4

1. Fill ups

a) $1728 + \underline{\hspace{2cm}} = 1728$

b) $0 + \underline{\hspace{2cm}} = 217$

c) $1300 + (1900+2700) = (1300+1900) + \underline{\hspace{2cm}}$

2. Find the sum.

a) 1911 and 1622

b) 1052, 1393 and 1105

c) 4359 and 2738

3. Arrange in columns and Add.

$7234 + 2312$

4. State True or False.

a) $699 + 0 = 700$

b) $3000 + 7 = 307$

c) $7 + 9 = 9 + 7$

5. Add.

a) $3978 + 2678$

b) $6000 + 2000$

6. Maya has 26 pebbles, Shikha has 72 pebbles. How many pebbles they have together.

7. I have 30 colours at home and 27 colours in school. Can you tell me the total number of colours I do have.

SANT NIRANKARI PUBLIC SCHOOL TILAK NAGAR
ASSIGNMENT
SUBJECT – MATHS
CLASS-III
TOPIC –MULTIPLICATION
DAY -5

1. Fill ups.

- a) $15 \times 10 =$ _____
- b) $2 \times 5 =$ _____
- c) $43 \times 0 =$ _____
- d) $8 \times 1 =$ _____
- e) $304 \times 10 =$ _____

2. Solve.

- a) 41×8
- b) 37×16
- c) 12×12
- d) 23×45

3. Multiply.

- a) 372×16
- b) 151×25
- c) 307×11

4. Find the product.

- a) $87 \times 10 =$ _____
- b) $52 \times 100 =$ _____
- c) $675 \times 10 =$ _____
- d) $8 \times 1000 =$ _____

5. I see 105 puppies. How many ears do they have?

6. There are 37 baskets. There are 17 apples in each baskets. How many apples are there in all.

7. Dodging tables.

a) $7 \times 9 =$ _____

b) $2 \times 8 =$ _____

c) $3 \times 6 =$ _____

d) $8 \times 8 =$ _____

SANT NIRANKARI PUBLIC SCHOOL TILAK NAGAR
ASSIGNMENT
SUBJECT – MATHS
CLASS-III
TOPIC –DIVISION
DAY -6

1. Write to division fact for the following multiplication facts.

- a) $6 \times 3 = 18$
- b) $7 \times 4 = 28$
- c) $6 \times 8 = 48$
- d) $5 \times 7 = 35$

2. Fill in the blanks.

- a) $8 \div 8 = \underline{\hspace{2cm}}$
- b) $9 \div 1 = \underline{\hspace{2cm}}$
- c) $0 \div 5 = \underline{\hspace{2cm}}$
- d) $20 \div \underline{\hspace{2cm}} = 20$
- e) $14 \div \underline{\hspace{2cm}} = 1$

3. Divide and Write Q & R.

- a) $18 \div 2$
- b) $12 \div 3$
- c) $40 \div 5$
- d) $63 \div 7$

4. Divide and Check.

- a) $340 \div 5$
- b) $2976 \div 2$
- c) $356 \div 10$

5. Divide 15 children's into teams of 3. How many teams?

6. Share out 20 cards between 5 peoples. How many cards each will get.
7. Check whether 427 is even or odd by divison.

SANT NIRANKARI PUBLIC SCHOOL TILAK NAGAR
ASSIGNMENT
SUBJECT – MATHS
CLASS-III
TOPIC –MONEY
DAY -7

1. Convert into paise.
 - e) Rs 6.25
 - f) Rs 10.50
 - g) Rs 100.50

2. Convert to rupees.
 - f) 50p
 - g) 200p
 - h) 0.05p
 - i) 125p

3. Subtract:
 - a) $332.25 - 180.50$
 - b) $553.30 - 126.45$

4. Multiply:
 - a) 88.80×0.80
 - b) 61.3×5

5. Add:
 - a) 195.50 and 50.40
 - b) 10.10 and 74.12

6. Express in words.
 - a) 10.10
 - b) 25.25
 - c) 80.90

7. A packet of erasers cost Rs 50.50. What is the cost of 12 packets of eraser?

SANT NIRANKARI PUBLIC SCHOOL TILAK NAGAR
ASSIGNMENT
SUBJECT – MATHS
CLASS-III
TOPIC –GEOMETRY
DAY -8

1. What is a point?
2. Define:
 - a) Line
 - b) Curved line
3. How many types of straight lines are there?
4. Draw Line Segment.
 - a) 5cm
 - b) 8cm
 - c) 10cm
5. Write faces, edges, vertices of the shapes.
 - a) Cube
 - b) Cuboid
 - c) Cylinder
 - d) Cone
6. Write the number of sides and corners of the following.
 - a) Square
 - b) Triangle
 - c) Circle
7. Write true or False:
 - a) A cone has no vertex.
 - b) A cylinder has two edges.
 - c) A sphere has no edge.

SANT NIRANKARI PUBLIC SCHOOL TILAK NAGAR
ASSIGNMENT
SUBJECT – MATHS
CLASS-III
TOPIC – TIME
DAY -9

1. Fill ups:
 - a) a year has ____ days.
 - b) A week has _____ days.
 - c) December is the _____ month of the year.

2. What will be the time?
 - a) 3 hours after 10am.
 - b) 3 hours after 10pm.

3. Which one is the shortest hand in the clock?

4. Which hand completes one round first in the clock?

5. Write am or pm:
 - a) 6:55 in the morning.
 - b) 5:45 in the evening.
 - c) 11:10 in the afternoon.

6. Draw a clock:
 - a) 10:00am
 - b) 5:00pm

7. What is the time if minute hand points to 7 and hour hand is between 10 and 11?

8. What is the time if minute hand points to 5 and hour hand is between 7 and 8?

SANT NIRANKARI PUBLIC SCHOOL TILAK NAGAR
ASSIGNMENT
SUBJECT – MATHS
CLASS-III
TOPIC –SUBTRACTION
DAY -10

1. Fill in the missing numbers:
 - a) Take away 14 from 80 is _____
 - b) 150 decreased by 80 is _____
 - c) 20 subtractions from 148.

2. Fill ups:
 - a) $205 - 107 =$ _____
 - b) $410 -$ _____ $= 410$
 - c) $164 -$ _____ $= 163$

3. Subtract the following:
 - a) $56 - 45$
 - b) $556 - 445$
 - c) $5556 - 4445$

4. Subtract 4785 from 4785?

5. The sum of two numbers is 588. If one of the numbers is 231, find the other?

6. By how much is 3162 less than 2526?

7. In a school there are 450 children, 256 children are boys. How many of are girls?

8. In my textbook there are 826 pages out of which I have read 240 pages. How many pages are left?