

DAY 1

Sentences

1. Read the following conversation and identify the sentence types.

a) Pritha: Why were you absent yesterday?

Rahul: I had gone to my cousin's wedding.

Pritha: Did you enjoy yourself there?

Rahul: Oh yes, I had a wonderful time!

b) Teacher: Sanket, open the last chapter of the book.
Read the first paragraph loudly.

Sanket: I am opening it right now.

Teacher: What is the temperature outside?

Sanket: This may sound strange, but the temperature
has suddenly dropped!

2. Change these affirmative sentences into negative sentences.

a) She goes to school at 6 o'clock.

b) They have promised to bring chocolate cake for the birthday party.

c) My sister and brother visit the park every weekend.

d) Neha looked at the books on the shelf.

e) Priya has a Pomeranian dog.

3. Change these declarative sentences into interrogative sentences.

a) Raja can play the guitar.

b) Asha will drive the car to the yoga centre.

c) Cricket is Ram's favourite sport.

d) Biswas knows how to convince his parents.

4. Change the interrogative sentences to declarative sentences.

a) Will you be on the flight tomorrow?

b) Should I switch off the lights?

c) Does Shelly believe in God?

d) Is John's sister singing now?

e) Wasn't the girl wearing a red dress at the wedding?

NAME: _____
CLASS: _____
SECTION: _____

DAY 2

Sentence Analysis

1. **Underline the *subject* and circle the *predicate* in the following sentences.**

- a) Ashok asked me to go to the market.
- b) Joy recites poems beautifully.
- c) My uncle serves in the Navy.
- d) The man and his sister were singing in the auditorium.
- e) The rich businessman was giving blankets to the beggars.

2. **Underline the *subject* and circle the *verb* in the following sentences.**

- a) My brother always drinks milk at night.
- b) Neither Ram nor Ashutosh knows how to swim.
- c) Everybody enjoys good food.
- d) An event was organized on the school campus.
- e) Which baby is the prettiest?

3. **Underline the *verbs* and *verb phrases* in the following sentences.**

- a) Ankita is coming with us to the market.
- b) Write the letter carefully.
- c) Tithi doesn't like cricket.
- d) They have gotten a lot of snowfall this year.
- e) Sumi must get a few sponsors for the event.

4. Underline the *direct objects* and circle the *indirect objects* in each of these sentences.

- a) Tuhin gave Souvik his psychology papers.
- b) My mother gave me a new blue dress.
- c) Joe brings chocolates for his family.
- d) Anshul sent his sister gothic novels.
- e) John showed the teacher his Maths copy.

5. Rearrange these words to write correct sentences.

a) She/the new coffee mug/in the cupboard/put

b) her pet/ Amna /enjoys playing with

c) from his uncle/ got his/ Aniket/ favourite game

d) horror movies/ do not/ I/ enjoy

e) her singing/ Neha/ about/ is passionate

6. Mark the verbs in the sentences as *transitive* (T) or *intransitive* (I).

a) They sold the entire property.

b) Let's meet at my place.

c) I showed my friend my new designs.

d) She was crying loudly in front of everyone.

e) Hena walks to work every day.

DAY 3

Nouns

1. Underline the *nouns* in the following sentences and list their type—proper (P), common (C), collective (C0), abstract (A).

- a) There is a dog on the road. _____
- b) Paris is the capital of France. _____
- c) Aman is known for his honesty. _____
- d) Rohit visited Anjali with a bunch of flowers. _____
- e) Joe must tell the truth. _____

2. Write the *masculine* or *feminine* nouns for the following.

- a) bachelor _____ b) sister _____
- c) count _____ d) queen _____
- e) wizard _____ f) niece _____

3. Write the *plurals* for these nouns.

- a) house _____ e) goose _____
- b) bus _____ f) city _____
- c) leaf _____ g) idea _____
- d) wish _____ h) tax _____

4. Complete the sentences using the simple past or the past continuous form of the verbs given in brackets.

- a) The child _____ (jump) with joy when he won the prize.
- b) I _____ (wash) my hair when the doorbell rang.
- c) She _____ (cycle) up the hill when the brakes failed.
- d) She was _____ (sleep) when she heard the burglar.

5. Complete the questions with was, were, or did, then write short answers for each. The first one has been done for you.

- a) Were you sleeping when the phone rang?

No, I wasn't./Yes, I was.

- b) _____ your classmates attend the extra class today?

- c) _____ your sister in school on Friday?

- d) _____ they at home when the roses arrived?

- e) _____ you bake the cake from a You Tube recipe?

- f) _____

6. Complete these dialogues using the present perfect or the simple past.

- a) All the major highways had been _____ (seal) off to make way for the parade.

- b) On my visit to the Vatican, I _____ (learn) a lot about Roman Catholicism.

- c) We are exhausted after the marathon.

Oh! That's why you _____ (opt) to order a takeaway meal.

- d) The airplane _____ (crash) into the Alps.

It was a complete disaster.

- e) Medicine _____ (make) major strides in terms of research and development.

One of the foremost research findings is the discovery of penicillin.

DAY 4

Adjectives

1. Choose suitable adjectives from the list below to fill in the blanks.

adorable rude beautiful sharp huge

- a) I am looking for a _____ girl to play Cinderella.
- b) You've made a _____ mistake.
- c) Kuhu is an _____ baby.
- d) Her _____ behaviour makes me angry.
- e) Akhil felt a _____ pain in his stomach.

2. Place the adjectives in the correct order in these sentences.

- a) Trisha adopted a _____ rabbit.
(white, beautiful, small)
- b) We live in a _____ house.
(large, yellow, old)
- c) The shop carries a variety of _____ items.
(antique, interesting, old)
- d) Rahul bought a pair of _____ shoes.
(new, nice, brown)
- e) I really like that _____ box.
(square, big, blue)

3. Tick (✓) the correct adjective in each of these sentences.

- a) Sushil is (extremely/slightly) loud. He is known as noise maker.
- b) They saw (much/many) animals at the zoo.
- c) We need (a few/a little) water.
- d) I don't know (any/some) of them.
- e) Anish has (little/less) interest in western music.

4. Underline the adjectives in these sentences and state their type.

- a) The lion is a ferocious animal. _____
- b) Whose book is this? _____
- c) There are some oranges on the table. _____
- d) Those books are mine. _____
- e) My sister is a wonderful painter. _____
- f) Nita has little intellect. _____

5. Fill in the *comparative* and *superlative* degrees in the table.

Positive Degree	Comparative Degree	Superlative Degree
a) angry		
b) bright		
c) famous		
d) little		
e) quick		
f) lovely		

DAY 5

Articles

- A. Can you put articles in Arnav's speech to help him improve it? If an article is not required, put a cross (X) in the space next to it.

Hello! I am Arnav. I am 28 years old. I am _____ medical student in _____ Boston. I look after _____ sick and ailing. I work at _____ St. Vincent's Medical Center. It was built by _____ charitable institution.

- B. Read the words and phrases aloud, then put an an or a before them.

- _____ university
- _____ elephant
- _____ unicorn
- _____ door
- _____ uninteresting movie.
- _____ apple pie
- _____ antique necklace.
- _____ warm welcome.

- C. Complete the sentences with a or and.

- We like to eat _____ healthy meal.
- That is _____ can of worms.
- The antique car is _____ white elephant.
- Could you pass me _____ egg and _____ slice of bread?
- Have you ever sailed on _____ yatch? It is great fun!

- D. Complete the dialogues using a, an or the. Put an X where an article is not required.

- Do you know that she is _____ officer in the army?
Yes, I heard you mention it.
- Manali has _____ beautiful resort hotel.
Yes, I visited _____ resort last week. It was impressive.

c. What are _____ candidate's qualifications? Is he _____ professionally qualified?

No, he is not yet _____ graduate.

d. He broke his arm while climbing _____ tree and has been in _____ bed ever since _____ accident.

E. Choose the correct options to complete the sentences. Say if both options are suitable.

a. I found an axe / the axe to cut the tree down.

b. She is the born dancer/ a born dancer and has many other talents.

c. A fire/ the fire broke out in the hotel/ a hotel because of the storm.

d. What do you think of a rug/ the rug on the floor of the living room?

e. Do you like portrait / the portrait on the wall?

1.

F. Complete the paragraph below using a or the where required. Put an X where an article is not required.

At first, we had _____ talking movie. It took _____ audience by storm. It was an improvement on _____ earlier silent movie of the 19th century. Film makers cashed in on its immense popularity. Women did not usually act in _____ films. Acting as _____ profession was taboo for women. Men undertook to act as women. _____ actresses who performed on stage were also frowned upon. _____ very popular movie of the times was 'Gone With The Wind.' It was _____ huge success at _____ box office.

C.

D.

DAY 6

Pronouns

1. Complete these sentences with suitable pronouns.

A. Sheena bought a sister a cake for her birthday.

- _____ gave it to _____ last evening.
- _____ bought it from a bakery caked L'opera.
- _____ was a chocolate cake with butterscotch.
- _____ weighed two pounds.

B. Amit attended school today.

- _____ was his first day at school.
- _____ bought a new bag to take to school.
- _____ was a new experience for _____.
- _____ really enjoyed _____ first day at school and made many friends.

C. Tia put the clothes in the washing machine.

- _____ needed to run a wash.
- _____ was a busy day.
- The washing machine ran for an hour while _____ washed the dirty clothes.
- Then Tia put _____ out to dry.

D. My grandparents are quite old.

- I worry about _____ health and try to help _____ when I can.
- _____ often help me with homework.
- _____ are my favourite people in the world.
- _____ cannot drive so I walk them down to the grocery store.

2. Demonstrative pronouns

E. Match the phrases in column A to the ones in column B to complete the sentences.

These are the clothes	I've been looking for.
That is the blue dress	Grandma left on the desk.
These are the spectacles	I cannot reach on the top shelf.
Those are the shoes	that were on sale.

F. Use what, which, who, whose, and whom to complete the sentences.

- _____ gave you directions to my house?
- _____ will you call to complain about the neighbours?
- _____ is that boy in red?
- _____ shoes are those on the rug?

G. Complete the dialogues with reflexive pronouns.

- a. I really like the sweater you are wearing. Who knitted it for you?
I knitted it _____.
- b. You have been working very hard.
Yes, I need to treat _____ to a cup of tea.
- c. The children are enjoying _____ in the zoo.
Yes, I can see that. I'm really glad we came.
- d. What happened to him?
He injured _____ while rock climbing.

H. State whether the underlined pronouns in the following sentences are emphatic or reflexive.

- a. He himself cleaned the garage.
- b. She fell off the bike and hurt herself.
- c. She herself read the contract before she signed it.
- d. Do look after yourself when you are away from home.



DAY 7

Types of Verbs

1. **Underline the main verb, circle the modals, and tick (✓) the auxiliary verbs in these phrases.**

- a) shall go
- b) are playing
- c) might come
- d) is talking
- e) have done
- f) had won

2. **Mark the different parts of the verb phrase in these questions and statements.**

a) She had won the match.

b) Does she work here?

c) Ananya is talking to the bank manager.

d) Viv has been working hard all day.

e) What are you planning for the coming weekend?

3. **Underline the verbs in these sentences and state whether they are finite or non-finite.**

a) Ahana wants to top the class. _____

b) He couldn't solve the problem. _____

c) Mohit plays football. _____

d) Tarun was reading the newspaper. _____

e) Diya was asked to submit her assignments by Thursday. _____

4. Tick (✓) the correct option in each sentence.

- a) Can I take / to take your bicycle?
- b) Kyle needs complete / to complete the article as early as possible.
- c) Arun has planned to buy / buy the car.
- d) Joy likes to eat / eat vanilla ice cream.
- e) Erin is happy inform / to inform us about her promotion.

5. Use the *to infinitive* and *bare infinitive* forms of the verbs given in brackets.

- a) I saw him _____ (jump) from the bridge.
- b) Arati has _____ (complete) assignment.
- c) Do you know how _____ (make) soup?
- d) Jinia should _____ (ask) her parents.
- e) I prefer _____ (stay) at home rather than _____ (go) to the tedious event.

6. Complete the sentences with *would rather* and *had better* before the infinitive verbs.

- a) I _____ stay home than go to a football match.
- b) Amrita _____ buy the book before it goes out of stock.
- c) Anish _____ live in village.
- d) John _____ listen to you.
- e) You _____ complete the homework before father comes.

7. Join these sentences using *too* or *enough*.

a) Romit's grandfather is very fit. He can run two miles at a stretch. (enough)

b) Meghna is very proud. She will not ask for help. (too)

c) He is very poor. He cannot buy clothes. (too)

d) Nita is very rich. She can buy the car easily. (enough)

e) There is plenty of time. They can play one more game. (enough)

8. Complete the sentences with the gerund form of the verbs in brackets.

- a) Tina is crazy about _____. (sing)
- b) He enjoys _____ football. (play)
- c) Jack should give up _____. (smoke)
- d) My uncle is afraid of _____ by bike. (go)
- e) Jayita is interested in _____ tuition. (give)



DAY 8

The Present Tense

A. Tick the correct statements, questions and negative sentences.

- Sita likes eating fresh fruit.
- Does the policeman work for eight hours on duty?
- He always listens to his father.
- He does not practice for his musical recital in the evenings.
- He like chocolate ice cream.

B. Answer the following questions using the simple present tense.

- a. Where do you store the pickle?

_____ (store) it in the fridge.

- b. Why are there so many people here this evening?

People _____ gathered to watch the cricket match.

- c. Do you know the work of this artist?

Yes, he _____ (paint) amazing landscapes.

- d. What does the message say?

_____ that Mother will be late coming home today.

- e. What day is it today?

_____ Friday.

C. Make a paper aero plane by following instructions. Write the instructions for your students.

- Use + regular + A4 + size + paper
- Paper + rectangular + shape
- Fold + paper + half
- Fold + two + top + corners + towards + middle crease
- Fold + flap + towards + middle + paper
- Fold + paper + half
- Fold + wings + down
- Fly + plane + air

D. Read about the habits of different people, and then use the prompts to make sentences. The first one has been done for you.

- a. Sally/blue / wears/ always
Sally always wears blue.
- b. Rehmat / laps / swims / many / pool/ in
_____.
- c. Ali / often/ play/ tennis / with/ coach/ his
_____.
- d. Seema / never/ washes/ feet/ her / night/ at
_____.
- e. Meena / jog/ every/ morning
_____.
- f. I/ yoga/ every/day
_____.

E. Complete the questions and statements with is, am, or are. The first one has been done for you.

- a. Is Clara a US citizen?
- b. _____ they going to the concert?
- c. I _____ going home today.
- d. They _____ working on the project. (negative)
- e. They _____ going skiing this week. (negative).
- f. You _____ doing your homework. (negative)

F. Write the present participle form of the given verbs.

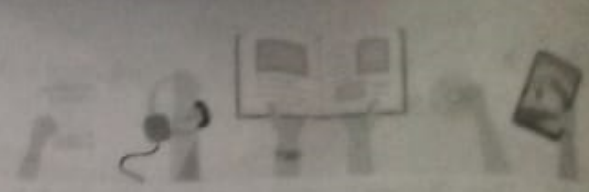
- a. worry
- b. give
- c. marry
- d. ship
- e. blow
- f. be

Simple Present Versus Present Continuous

G. Put the verbs in the correct forms: present continuous or simple present.

- a. Let's go jogging. It _____ not snowing any more.
- b. Julia is very good at drawing. She has _____ (draw) six portraits by now.
- c. Be quick! Everybody _____ (wait) for you to finish.

NAME:
 CLASS:
 SECTION:



DAY 9

The Simple Past Tense

1. Complete the sentences with the simple past tense form of the verbs given in brackets.

- a) Sita _____ her clothes last evening. (iron)
- b) The knight _____ the lady from the monster. (save)
- c) Sheila _____ for two days on the project. (work)
- d) I _____ on the light. (switch + no)

2. Write the verbs in the simple past form in the columns of the table according to their sounds. The first one has been done for you.

chat	stuff	blot	wave	drop	trickle	scrub	wean	glisten
deplete	shirk	mould	dash					

t/	/id/	/d/
	chatted	

3. Write the simple past form of the following verbs and list them in the appropriate columns of the table given below. The first one has been done for you.

- a) glance
- b) stare
- c) betray
- d) marry
- e) share
- f) examine
- g) hug
- h) cry
- i) stop
- j) store
- k) fry
- l) engage
- m) stray
- n) stay

ending in -e (+ -d)	vowel + -y (+ -ed)	consonant + -y (omit -y + -ied)	ending in vowel + -b/-g/-l/-p/-r (double last consonant + -ed)
glanced		married	hugged
stored	strayed	cried	stopped
stared	stayed	fried	
examined	betrayed		
engaged			

4. Write the past tense forms of the following verbs.

a) beat _____

c) begin _____

e) bite _____

g) do _____

i) draw _____

b) dream _____

d) fall _____

f) feed _____

h) fight _____

j) find _____

5. Rewrite the given sentences in the negative. Then, add an affirmative sentence in the simple past using the prompt given in brackets. The first one has been done for you.

a) She went on holiday. (to work)

She did not go on holiday. She went to work.

b) He fried the eggs in a frying pan. (put on a grill)

c) He wanted the offender to be jailed. (to be fined)

d) I drank all the milk. (left some)

e) We met in New Delhi. (in Mumbai)

NAME:

CLASS:

SECTION:

DAY 10

The Past Tense: Continued

1. Complete the sentences using the past continuous tense.

- a) Sheena _____ (knit) a grey pullover.
- b) Zeeshan _____ (drink) a cup of hot chocolate.
- c) Alisha _____ (weed) the garden.
- d) Tania _____ (clean) her cupboards for spring.
- e) Sam and Rajeev _____ (play) chess.

2. Form questions using the prompts given below. Then, answer the questions using the information in Exercise 1. The first one has been done for you.

- a. Sheena / puts/ clothes / out/ dry/ on the terrace.
Was Sheena putting the clothes out to dry on the terrace? No, she was knitting a grey pullover.
- b. Alisha/call/sister.
- c. Zeeshan/drink/tea
- d. Tania/read/ book.
- e. Sam and Rajeev/play/computer games.

3. Match the questions and answers in the two columns to complete the dialogues.

Column A	Column B
a. Where were you when the lights went out?	i. He said there had been a major breakdown and that it would take an hour to restore the electricity.
b. What did the electrician say?	ii. I have an exam tomorrow and I have not studied enough.
c. What time is your examination?	iii. I was in the study, reading.
d. Why are you stressed?	iv. It is at 12 noon tomorrow.

4. Complete the following sentences with appropriate *singular or plural* forms of the nouns given in brackets.

- a) They have three _____ (child). They bought new _____ (dress) for them.
- b) My brother bought _____ (sock) from the shop.
- c) He bought five big _____ (potato) from the local market.
- d) I saw two _____ (mouse) in the kitchen.
- e) Those _____ (painting) are really beautiful.

5. Read aloud the following words and place them in the columns according to their sounds.

stoves	brushes	roofs	rooms	months	judges
	/s/		/iz/		/z/

6. State whether the following nouns are countable (C) or uncountable (UC).

- a) milk _____
- b) scientists _____
- c) butter _____
- d) people _____
- e) second _____
- f) apple _____
- g) music _____
- h) knowledge _____

अभ्यास पत्रक - १
संज्ञा सर्वनाम और विशेषण

1. डाकू शब्द की भाववाचक संज्ञा है-
 - a. डाकुओं
 - b. डकैत
 - c. डकैती
 - d. डाकुल
2. उस पेड़ पर चढ़ जाओ - यहाँ रेखांकित शब्द में विशेषण है -
 - a. संख्यावाचक
 - b. सार्वनामिक
 - c. गुणवाचक
 - d. परिमाणवाचक
3. 'खुद' शब्द सर्वनाम के किस भेद का उदाहरण है?
 - a. निश्चयवाचक
 - b. पुरुषवाचक
 - c. संबंधवाचक
 - d. निजवाचक
4. विशेषण शब्द जिन शब्दों की विशेषता बताते हैं उन्हें _____ कहते हैं।
 - a. प्रविशेषण
 - b. विशेष्य

- c. संज्ञा
- d. विशेषण

5. इस कक्षा में पैंतीस छात्र हैं। रेखांकित का विशेषण भेद बताइए।

- a. संकेतवाचक
- b. संख्यावाचक
- c. गुणवाचक
- d. परिमाणवाचक

6. विशेष्य से आप क्या समझते हैं? उदाहरण द्वारा स्पष्ट कीजिए।

7. संज्ञा के अन्य दोनों भेदों को उदाहरण देकर स्पष्ट कीजिए।

8. संज्ञा के भेदों को उदाहरण सहित स्पष्ट कीजिए।

9. सर्वनाम के कोई दो भेद उदाहरण सहित स्पष्ट कीजिए।

10. कोष्ठक में दिए गए शब्दों के विशेषण बनाकर रिक्त स्थानों की पूर्ति कीजिए-

- i. वेंकट और स्वामी _____ भाई हैं। (चाचा)
- ii. शेर हिंसक तथा _____ जानवर है। (जंगल)
- iii. ताजमहल एक प्राचीन _____ इमारत है।
(इतिहास)
- iv. विद्यार्थियों को शिक्षा तथा _____ कहानियाँ
पढ़नी चाहिए। (ज्ञान)

अभ्यास पत्रक - 2 विलोम शब्द

1. उचित - शब्द का उचित विलोम शब्द है-
 - a. खेल
 - b. शील
 - c. मेल
 - d. अनुचित
2. संयोग - शब्द का उचित विलोम है-
 - a. घन
 - b. वियोग
 - c. अंक
 - d. अशोक
3. गरीब - शब्द का उचित विलोम शब्द है-
 - a. धेनु
 - b. कुल
 - c. अमीर
 - d. अति
4. अनाथ - शब्द का उचित विलोम है
 - a. कम
 - b. नाथ
 - c. बिना
 - d. थोड़ा

5. पुराना - शब्द का उचित विलोम है

- a. पुरातन
- b. नवीन
- c. नया
- d. अच्छा

6. निम्नलिखित शब्दों के विलोम शब्द लिखिए-

- i. कायर
- ii. अनुज
- iii. आदि
- iv. कृतज्ञ

7. निम्नलिखित शब्दों के विलोम शब्द लिखिए-

- i. आलस्य
- ii. निर्माण
- iii. आगमन
- iv. सुगम

8. निम्नलिखित शब्दों के विलोम शब्द लिखिए-

- i. एकता
- ii. बाढ़
- iii. अनुराग
- iv. अर्थ

9. निम्नलिखित शब्दों के विलोम शब्द लिखिए-

- i. सज्जन
- ii. पुचकारना
- iii. चौड़ी
- iv. मोक्ष

10. निम्नलिखित शब्दों के विलोम शब्द लिखिए-

- i. चिंतित
- ii. सख्त
- iii. जीवन
- iv. उत्थान

अभ्यास पत्रक - 3 पर्यायवाची शब्द

1. अमृत - शब्द का पर्यायवाची शब्द है-
 - a. कगार
 - b. अश्म
 - c. मतंग
 - d. सुधा
2. आरोग्य शब्द का पर्यायवाची शब्द है-
 - a. रोगी
 - b. रोग
 - c. स्वस्थ
 - d. अस्वस्थता
3. मोक्ष - शब्द का पर्यायवाची शब्द है-
 - a. मुक्ति
 - b. सार्थक
 - c. मृतप्राय
 - d. जीवन

4. कुबेर - शब्द का पर्यायवाची शब्द है-

- a. फलपति
- b. संपत्ति
- c. धनपति
- d. सुपति

ईश्वर - शब्द का पर्यायवाची शब्द है-

- 5.
- a. प्रभु
 - b. महान
 - c. विद्वान
 - d. असुर

6. दो-दो पर्यायवाची लिखिए-

- i. सुबह
- ii. कमल
- iii. अंधकार
- iv. मनुष्य

7. दो-दो पर्यायवाची लिखिए-

- i. उन्नति
- ii. धरती
- iii. वन
- iv. पुष्प

8. दो-दो पर्यायवाची लिखिए-

- i. कपड़ा
- ii. मित्र
- iii. युद्ध
- iv. हवा

9. दो-दो पर्यायवाची लिखिए-

- i. भौरा
- ii. अग्नि
- iii. नदी
- iv. दिन

10. दो-दो पर्यायवाची लिखिए-

- i. बगीचा
- ii. पानी
- iii. तालाब
- iv. किनारा

अभ्यास पत्रक -४
वर्तनी

1. अशुद्ध वर्तनी की पहचान कीजिए:-
कलम, स्याही, दावात, स्लेट
 - a. स्लेट
 - b. दावात
 - c. स्याही
 - d. कलम
2. शुद्ध वर्तनी की पहचान कीजिए:-
घोसणा, घोषाणा, घोशणा, घोषणा
 - a. घोशणा
 - b. घोषणा
 - c. घोसणा
 - d. घोषाणा
3. अशुद्ध वर्तनी की पहचान कीजिए:-
उत्पत्ति, उपजाऊं, यथार्थ, कृषि
 - a. यथार्थ
 - b. उत्पत्ति
 - c. उपजाऊं
 - d. कृषि
4. शुद्ध वर्तनी की पहचान कीजिए:-
उज्वल, उज्ज्वल, ऊज्जवल, उद्ज्वल

4. शुद्ध वर्तनी की पहचान कीजिए:-

उज्वल, उज्ज्वल, ऊज्जवल, उद्ज्वल

- a. ऊज्जवल
- b. उद्ज्वल
- c. उज्ज्वल
- d. उज्वल

5. शुद्ध वर्तनी की पहचान कीजिए:-

इच्छा, इक्षा, ईक्षा, ईच्छा

- a. इच्छा
- b. ईक्षा
- c. ईच्छा
- d. इक्षा

6. निम्नलिखित को शुद्ध कीजिए-

- i. वधु
- ii. परिणती
- iii. अलोकिक
- iv. व्यवहारिक

7. निम्नलिखित को शुद्ध कीजिए-

- i. मधू
- ii. पूर्ती
- iii. पत्नि
- iv. म्रिग

8. निम्नलिखित को शुद्ध कीजिए-

- i. नदान
- ii. अतिथी
- iii. तलाब
- iv. आपत्ती

9. निम्नलिखित को शुद्ध कीजिए-

- i. पैत्रिक
- ii. त्यौहार
- iii. परिक्षा
- iv. कवी

10. निम्नलिखित को शुद्ध कीजिए-

- i. मन्दी
- ii. अगामी
- iii. अधिन
- iv. अशीर्वाद

अभ्यास पत्रक -५
अनेक के लिए एक शब्द

1. जिसका अनुभव किया गया हो:
 - a. अननुभूत
 - b. विचार
 - c. अनुभूत
 - d. ज्ञान
2. वसंत पंचमी के दिन मनाया जाने वाला उत्सव:
 - a. वसंतोत्सव
 - b. पतंगबाजी
 - c. काव्यपाठ
 - d. सरस्वती पूजा
3. शिशुओं की अवस्था से संबंधित:
 - a. शैशव
 - b. बचपन
 - c. लड़कपन
 - d. बाल्यकाल
4. गायों को पालने और रखने का स्थान:
 - a. धान
 - b. गौशाला
 - c. पशुपालन
 - d. हाता

5. जिसका कहीं कोई अंत न होता हो:

- a. अखंड
- b. अनश्वर
- c. अनादि
- d. अनंत

6. दिए गए वाक्यांशों के लिए एक शब्द लिखिए-

- i. जिसके हाथ में चक्र हो
- ii. जानने की इच्छा
- iii. जो त्यागने योग्य हो
- iv. गोद लिया हुआ पुत्र

7. दिए गए वाक्यांशों के लिए एक शब्द लिखिए-

- i. जिसका जन्म नहीं होता
- ii. पुस्तकों की समीक्षा करने वाला
- iii. जिसे गिना न जा सके
- iv. जो कुछ भी नहीं जानता हो

8. दिए गए वाक्यांशों के लिए एक शब्द लिखिए-

- i. जिसका कोई आधार न हो
- ii. जिसका अनुभव किया गया हो
- iii. सबको समान दृष्टि से देखने वाला

iv. जो दूर की सोचे

9. दिए गए वाक्यांशों के लिए एक शब्द लिखिए-

- i. जो विधि के अनुकूल है
- ii. जो बहुत बोलता हो
- iii. शरण पाने का इच्छुक
- iv. सौ वर्ष का समय

10. दिए गए वाक्यांशों के लिए एक शब्द लिखिए-

- i. जो छिपाने योग्य हो
- ii. दोपहर से पूर्व का समय
- iii. जहाँ पहुँचा न जा सके
- iv. सब कुछ जानने वाला

अभ्यास पत्रक - ६ अपठित गद्यांश

1. निम्नलिखित गद्यांश को पढ़कर नीचे दिए गए प्रश्नों के सही उत्तर लिखिए:

हमारा देश भारत एक विशाल देश है। इसका इतिहास अत्यंत प्राचीन तथा समृद्ध रहा है। भारत एक बहुआयामी संस्कृति वाला अद्भुत देश है। यहाँ अनेक भाषा, धर्म, संप्रदाय, वर्ग, जाति तथा मान्यताओं को मानने वाले लोग निवास करते हैं। विविधता में एकता भारत की पहचान है। हिन्दू, मुस्लिम, सिख, ईसाई सभी मिल-जुलकर प्रेम भाव से यहाँ रहते आए हैं। विविधता के बीच एकता तथा राष्ट्र प्रेम की भावना के कारण ही हमारे देश की आन, बान तथा शान का झण्डा पूरे विश्व में लहरा रहा है।

- i. हमारा देश भारत कैसा है?
- ii. भारत का इतिहास कैसा रहा है?
- iii. भारत में किस प्रकार के लोग निवास करते हैं?
- iv. हमारी पहचान क्या है?
- v. किसका झण्डा पूरे आन, बान तथा शान के साथ लहरा रहा है?

2. निम्नलिखित गद्यांशों को पढ़कर उन पर आधारित प्रश्नों के उत्तर दीजिए:

एक व्यापारी अपने ग्राहक को शहद बेच रहा था, तभी अचानक व्यापारी के हाथ से फिसलकर शहद का बर्तन गिर गया। बहुत-सा शहद भूमि पर बिखर गया। जितना शहद ऊपर-ऊपर से उठाया जा सकता था, उतना व्यापारी ने उठा लिया, परंतु कुछ शहद फिर भी जमीन पर गिरा रह गया। कुछ ही देर में बहुत-सी मक्खियाँ उस जमीन पर गिरे हुए शहद पर आकर बैठ गईं। शहद उन्हें बड़ा अच्छा लगा। वह जल्दी-जल्दी से चाटने लगीं। जब तक उनका पेट भर नहीं गया शहद चाटती रहीं। जब मक्खियों का पेट भर गया और उन्होंने उड़ना चाहा, तो उड़ न सकी, क्योंकि उनके पंख शहद में चिपक गए थे। उड़ने के लिए उन्होंने बहुत कोशिश की, परंतु वह फिर भी उड़ न पाई। वह जितना छटपटाती उनके पंख उतने चिपकते जाते। उनके सारे शरीर में शहद लगता जाता। काफी मक्खियाँ शहद में लोट-पोट होकर मर गईं। बहुत-सी मक्खियाँ पंख चिपकने से छटपटा रही थीं, परंतु तब भी नई मक्खियाँ शहद के लालच में वहाँ आती रहीं। मरी और छटपटाती मक्खियों को देखकर भी वह शहद खाने का लालच नहीं छोड़ पाई।

- i. शहद जमीन पर गिरा क्यों रह गया?
- (क) बहुत-सा शहद बिखरा था
 - (ख) शहद भूमि पर बिखरा था
 - (ग) ऊपर-ऊपर जितना उठ सका, उठाया गया
 - (घ) शहद का बर्तन गिर गया था
- ii. मक्खियाँ कब तक शहद को चाटती रहीं?
- (क) जब तक व्यापारी नहीं आया
 - (ख) जब तक उनका पेट नहीं भरा
 - (ग) जब तक उन्हें उड़ाया नहीं गया
 - (घ) जब तक शहद समाप्त न हुआ
- iii. मक्खियों के सारे शरीर में शहद किस प्रकार लग गया?
- (क) छटपटाने से पंख चिपकते जाते
 - (ख) शहद भर पेट खाने से
 - (ग) व्यापारी ने शहद शरीर पर लगा दिया
 - (घ) शहद बिखरने के कारण
- iv. कहानी का उचित शीर्षक हो सकता है।
- (क) मक्खी
 - (ख) लालची मक्खियाँ
 - (ग) व्यापारी
 - (घ) टूटे पंख

v. 'जमीन' शब्द का विलोम है।

(क) जमीं

(ख) भूमि

(ग) धरती

(घ) आसमान

अभ्यास पत्रक -७
उपसर्ग और प्रत्यय

1. अत्यंत में प्रयुक्त उपसर्ग कौन-सा है?
 - a. अत्
 - b. अत्य
 - c. अ
 - d. अति
2. हिंदी में किस भाषा के उपसर्ग नहीं प्रयुक्त होते हैं?
 - a. अंग्रेज़ी
 - b. उर्दू
 - c. संस्कृत
 - d. हिंदी
3. असिस्टेंट किस उपसर्ग का भाग है?
 - a. फ़ारसी
 - b. अंग्रेज़ी
 - c. हिंदी
 - d. उर्दू
4. किस शब्द में 'आवट' प्रत्यय प्रयुक्त नहीं है?
 - a. सजावट
 - b. लिखावट
 - c. गिरावट
 - d. अकुलाहट

5. किस शब्द में 'भर' उपसर्ग नहीं है?

- a. भरोसा
- b. भरपूर
- c. भरपेट
- d. भरदिन

6. निम्नलिखित शब्दों में से उपसर्ग व मूलशब्द को अलग-अलग कीजिए-

- i. प्रसाधन
- ii. अभिजात
- iii. संसर्ग
- iv. दुर्भाग्य

7. निम्नलिखित शब्दों में से उपसर्ग व मूलशब्द को अलग-अलग कीजिए-

- i. दुर्लभ
- ii. निर्द्वंद्व
- iii. उपमान
- iv. अमर

8. निम्नलिखित शब्दों में प्रयुक्त प्रत्यय व मूल शब्द को अलग-अलग कीजिए-

- i. अभिमानी
- ii. अपमानित
- iii. परिपूर्णता
- iv. दुस्साहसी

9. निम्नलिखित शब्दों में प्रयुक्त प्रत्यय व मूल शब्द को अलग-अलग कीजिए-

- i. उपदेशक
- ii. दयालुता
- iii. अक्लमंदी
- iv. रंगीन

10. निम्नलिखित शब्दों में से उपसर्ग व मूलशब्द को अलग-अलग कीजिए-

- i. निर्वाह
- ii. विश्राम
- iii. परलोक
- iv. संभ्रांत

1. लगाम का वर्ण विच्छेद चुनिए:-
 - a. ल् + अ + ग् + अ + म् + अ
 - b. अ + ल् + ग् + म् + अ
 - c. इनमें से कोई नहीं
 - d. ल् + अ + ग् + आ + म् + अ
2. म् + ई + म् + आ + न् + स् + आ वर्णों से मिलकर बनता है।
 - a. मीमनशा
 - b. मइनमसआ
 - c. मीमांसा
 - d. मईनसा
3. स्वर को बोलने में किसकी सहायता लेनी पड़ती है?
 - a. स्वरों
 - b. अक्षरों
 - c. व्यंजनों
 - d. किसी की नहीं
4. इनमें से कौन-सा व्यंजन का भेद नहीं है?
 - a. अंतस्थ व्यंजन
 - b. ऊष्म व्यंजन
 - c. दीर्घ व्यंजन
 - d. स्पर्श व्यंजन

5. उत्पन्न का वर्ण विच्छेद चुनिए:-

- a. उ + त् + प् + अ + न् + न् + अ
- b. उ + त् + प् + न् + न् + आ
- c. उ + उ + त् + प् + न् + अ + न्
- d. उ + त् + अ + प् + न् + न्

6. निम्नलिखित शब्दों का वर्ण-विच्छेद कीजिए-

- i. कृत्रिम
- ii. विद्यालय
- iii. ब्रह्मा
- iv. श्रमसाध्य

7. निम्नलिखित शब्दों का वर्ण-विच्छेद कीजिए-

- i. आक्रमण
- ii. परिश्रम
- iii. अग्रिम
- iv. बन्धन

8. निम्नलिखित शब्दों का वर्ण-विच्छेद कीजिए-

- i. इस्तेमाल
- ii. अमावस्या
- iii. कंपनी

.....

IV. कृष्ण

9. निम्नलिखित शब्दों का वर्ण-विच्छेद कीजिए-

i. खरबूजा

ii. लड़का

iii. जीवन

iv. कंपनी

10. निम्नलिखित शब्दों का वर्ण-विच्छेद कीजिए-

i. कहानी

ii. अमृत

iii. सौभाग्य

iv. क्षमा

अभ्यास पत्रक -९
संधि-विच्छेद

1. वेद + अंत - इस संधि विच्छेद में संधि करो -
 - a. वेदे
 - b. वेदौ
 - c. वेदांत
 - d. वेदांतौ
2. सूर्योदय - इस शब्द का संधि विच्छेद है -
 - a. सूर्यो + दय
 - b. सूर्ये + दय
 - c. सूर्या + उदया
 - d. सूर्य + उदय
3. सीमांत का संधि-विच्छेद होगा
 - a. सीमा + अन्त
 - b. सीम + अंत
 - c. सीमा + अंत
 - d. सीमं + अत
4. संधि किये गए शब्दों को अलग करके पहले वाली स्थिति में लाना क्या है -
 - A. प्रत्यय
 - B. समास
 - C. संधि
 - D. संधिविच्छेद

8. निम्नलिखित शब्दों का सन्धि-विच्छेद कीजिए-

- i. विद्याध्ययन
- ii. चिरायु
- iii. तथास्तु
- iv. परमेश्वर

9. I. निम्नलिखित शब्दों में सन्धि कीजिए-

- i. भानु + उदय
- ii. शिक्षा + अर्थी

II. निम्नलिखित शब्दों का सन्धि-विच्छेद कीजिए-

- i. महाशय
- ii. सचिवालय

10. I. निम्नलिखित शब्दों में सन्धि-विच्छेद कीजिए-

- i. प्रत्युत्तर
- ii. संन्यास

II. निम्नलिखित शब्दों की सन्धि कीजिए-

- i. लंका + ईश
- ii. तथा + एवं

5. अभ्यागत का संधि विच्छेद करो

- a. अभि + आगत
- b. ओभि + आगत
- c. अभौ + आगत
- d. अभे + आगत

6. निम्नलिखित शब्दों में संधि कीजिए-

- i. राजा + ऋषि
- ii. एक + एक
- iii. सत् + वाणी
- iv. निः + उपाय

7. निम्नलिखित शब्दों में संधि कीजिए-

- i. उत् + शिष्ट
- ii. शरत् + चन्द्र
- iii. उत् + छिन्न
- iv. उत् + चारण

अभ्यास पत्रक -१० विराम चिह्नों का प्रयोग

1. वाह राधा ने कमाल कर दिया। - इस वाक्य में कौन -सा विराम चिह्न आएगा -
 - a. (?)
 - b. (!)
 - c. (।)
 - d. (,)
2. शाबाश! तुमने कमाल कर दिया। इस वाक्य में प्रयुक्त विराम चिह्न कौन से हैं -
 - a. प्रश्नवाचक, विस्मयादिसूचक
 - b. विस्मयबोधक-पूर्णविराम
 - c. योजक, अल्प विराम
 - d. अल्पविराम, पूर्ण विराम
3. विराम का अर्थ है -
 - a. हँसना
 - b. बोलना
 - c. चलना
 - d. रुकना

4. जहाँ कोई प्रश्न पूछा गया हो ; ऐसे वाक्यों में किस विराम चिह्न का प्रयोग होता है -

- a. (।)
- b. (?)
- c. (-)
- d. (!)

5. तुम क्यों रो रहे हो ? इस वाक्य में कौन- सा विराम चिह्न प्रयुक्त है -

- a. प्रश्नवाचक
- b. योजक
- c. अल्पविराम
- d. विस्मयबोधक

6. नीचे दिए वाक्यों में उचित विराम चिह्न लगाइए-

- i. सुनो, कौन आया है?
- ii. मितार्थ, बाहर देखो कौन है?
- iii. महादेव भाई अपना परिचय पीर-बावर्ची भिस्तीगर के रूप में देते थे।
- iv. उफ ! तुम कब जाओगे अतिथि?

7. नीचे दिए वाक्यों में उचित विराम चिह्न लगाइए-

- i. गाँधीजी ने कहा था-करो या मरो।
- ii. मित्रों ने आते ही पूछा, क्या यहाँ गाना-बजाना होगा?
- iii. सूर्यकांत त्रिपाठी निराला की रचना 'परिमल' प्रसिद्ध है।
- iv. तिलक गांधी नेहरू पटेल जैसे नेता आज दुर्लभ हैं?

8. नीचे दिए वाक्यों में उचित विराम चिह्न लगाइए-

- i. सूर्यास्त हो गया लालिमा का स्थान कालिमा ने ले लिया
- ii. प्रदूषण एक अभिशाप
- iii. राम घर जाता है
- iv. ताजमहल किसने बनवाया

9. नीचे दिए वाक्यों में उचित विराम चिह्न लगाइए-

- i. अध्यापक ने कक्षा में मंत्र लघुकथा सुनाई।
- ii. पिता जी ने पूछा तुम इधर-उधर कहाँ धूमते रहते हो?
- iii. सुनो यह क्या हो रहा है?
- iv. डॉ. रमाकान्त ने कहा, प्रतिदिन व्यायाम करने से स्वास्थ्य में सुधार होगा।

10. नीचे दिए वाक्यों में उचित विराम चिह्न लगाइए-

- i. माँ ने कहा कि जीवन में सुख दुःख आते रहते हैं
- ii. गीतांजलि रवींद्रनाथ ठाकुर की सर्वश्रेष्ठ कृति है
- iii. वह एक धूर्त आदमी है ऐसा उसके मित्र भी मानते हैं
- iv. कृष्ण के अनेक नाम हैं मोहन, गोपाल, गिरिधर आदि

SANT NIRANKARI PUBLIC SCHOOL, TILAK NAGAR

ASSIGNMENT-1 (APRIL 2020-21)

CLASS-VI

NUMBER SYSTEM

DAY-1

1) Round off the following numbers:

- 1) 887 to nearest tens
- 2) 1346 to nearest hundred
- 3) 55567 to nearest thousand
- 4) 99884 to nearest ten thousand c
- 5) 9876511 to nearest lakh
- 6) 84673522 to nearest ten lakh
- 7) 5476530 to nearest lakh

2) Write the word form and expanded form of followings:

- I. 4256
- II. 5480
- III. 6093
- IV. 6549
- V. 7894
- VI. 1235
- VII. 5432
- VIII. 6523
- IX. 8634

3) Write the standard form and expanded form:

- I. 6 5 4 3
- II. 2 3 5 0
- III. 2 3 6 6
- IV. 4 5 2 1
- V. 7 8 7 4
- VI. 4806

4) Write the following in standard and expanded form.

- I. Two thousand six hundred ninety nine
- II. Three thousand ninety
- III. Six thousand ninety two
- IV. Two thousand sixty three
- V. Five thousand three hundred nine
- VI. Seven thousand two hundred
- VII. Eight thousand sixty two
- VIII. Nine thousand five hundred sixty two

5) Write the 2-digit greatest number: _____

6) Write the 3-digit greatest number. _____

7) Write the 4-digit greatest number. _____

8) Write the 2-digit smallest number. _____

9) Write the 3-digit smallest number. _____

10) Write the 4-digit smallest number. _____

11) Write the following numbers in Roman Numerals.

- I. 341
- II. 1950
- III. 2116

12) Write the numbers in Ascending order:

- I. 4568 4785 5786 6489 5471 5264 4256 3547
- II. 6458 2589 4521 6523 1547 4520 4569 1658
- III. 7895 7485 7285 7630 7465 7822 4865 4685

13) Write the numbers in Descending order:

- I. 4568 4785 5786 6489 5471 5264 4256 3547

II. 6458 2589 4521 6523 1547 4520 4569 1658

III. 7895 7485 7285 7630 7465 7822 4865 4685

14) Write the place value of :

I. 3 in 4853

II. 5 in 5862

III. 3 in 1235

IV. 8 in 9853

V. 4 in 8745

VI. 6 in 6547

VII. 9 in 7964

VIII. 1 in 8173

SANT NIRANKARI PUBLIC SCHOOL, TILAK NAGAR

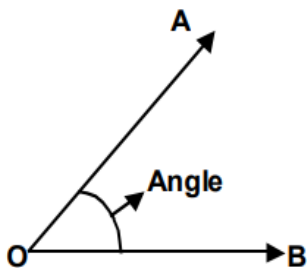
ASSIGNMENT-2 (APRIL 2020-21)

CLASS-VI


LINES AND ANGLES

DAY-2

- 1) What is line? Draw any line.
- 2) What is line segment? Draw any line segment.
- 3) What is ray? Draw any ray.
- 4) What is an angle?
- 5) Write the different types of an angle.
- 6) What is an acute angle? Draw one acute angle.
- 7) What is an obtuse angle? Draw one obtuse angle
- 8) Draw an angle 60°
- 9) Draw a line segment of length 8 cm. 11. Draw an angle 120°
- 10) See the figure, answer the following:
 - I. OA and OB are called _____ of the angle.
 - II. Point 'O' is called _____
 - III. Name the angle: _____ A O B



- 11) Draw any triangle.
- 12) Draw any quadrilateral.
- 13) Draw any pentagon.
- 14) Draw the hands of the clock when they make an angle greater than a right angle and write the time also



- 15) What kind of angle (acute , obtuse , right) is made by the hands of these clocks. Also write the time



16) Name the vertex and sides formed by the angles. Write the name of the angle also:

<p>Vertex: _____ Sides: _____</p>	<p>Vertex: _____ Sides: _____</p>
<p>Vertex: _____ Sides: _____</p>	<p>Vertex: _____ Sides: _____</p>
<p>Vertex: _____ Sides: _____</p>	<p>Vertex: _____ Sides: _____</p>

SANT NIRANKARI PUBLIC SCHOOL, TILAK NAGAR

ASSIGNMENT-3 (APRIL 2020-21)

CLASS-VI

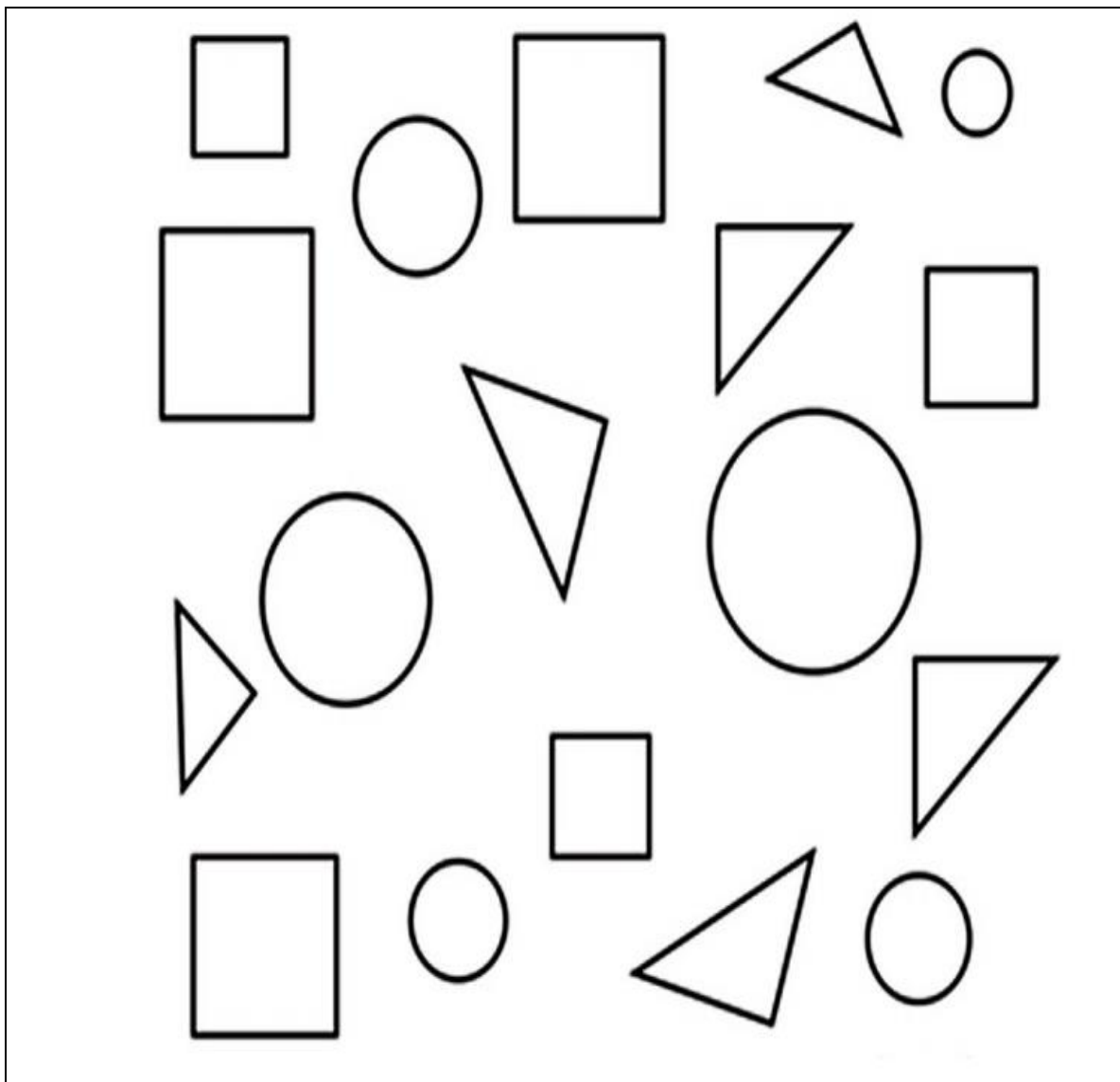
MEASUREMENT

DAY-3


- 1) fisherwomen of Jamnagar have started a bank. Each of them deposits Rs.965 every month. What amount is deposited in the bank in a year?
- 2) A cement tank costs Rs.3985. Raman wants to buy 3 cement tanks. He has Rs.10000 with him. Will he be able to buy the cement tanks?
- 3) A boat can carry 19 kgs of fresh fish. How many boats are needed to carry 57000g of fresh fish?
- 4) The distance between two cities is 36 km. jaya walks 2 km 40 m and then takes a taxi to travel one city to another. Find the distance to travel by bus.
- 5) A pack of oranges weight 7.4 kg. How much is that in grams?
- 6) A sack of potatoes weight 8.055 Kg. How much is that in grams?
- 7) A tub can hold 19 l of water. How many ml is that?
- 8) A can contains 2 l 425 ml of soft drink. How much soft drink will be there in 8 such cans?
- 9) 10 liters of milk to be packed in small bottles each one of which can hold 250 ml. How many such bottles are required?
- 10) Neeru and Meenu together weighs 63 Kg 350 g. If Neeru weighs 36 kg 275 g, what is Meenu's weight?
- 11) Seema bought 4 l 650 ml milk on Monday, 3 l 250 ml on Tuesday and 3 l 100 ml on Wednesday. How much milk she bought in 3 days altogether?
- 12) A bath tub can hold 60 l of water in it. It has 33 l 450 ml of water in it. How much water can be poured in it?
- 13) A car started out on a journey with 40 l of petrol. On reaching the destination it was found that the car still had 22 l 445 ml of petrol. What quantity of petrol was used up in the journey?
- 14) Fill in the blanks:

- 1) 63 Kg = _____g.
- 2) 1 km = _____m.
- 3) 123Kg= -----g
- 4) 12ml-----l
- 5) 789l-----ml
- 6) RS. 100-----p

15) Colour all the circles red, all the triangles green and all the squares blue



16) Name each shapes and colour the shapes with different colours.



SANT NIRANKARI PUBLIC SCHOOL, TILAK NAGAR

ASSIGNMENT-4 (APRIL 2020-21)

CLASS-VI

CIRCLES

DAY-4

- 1) Draw circles of different sizes using different circular things, i.e., coin, lid of a bottle, glass, etc.
- 2) Draw circles of different radii with the help of compass.
- 3) Draw a circle and show in it the centre, circumference and chord.
- 4) What is the relation between the diameter and radius of a circle?
- 5) **Fill in the blanks:**
 - I. The diameter of a circle passes through the of a circle.
 - II. Radius =/2
 - III. Diameter is the chord of a circle.
 - IV. Centre is a fixed point the circle.
- 6))A circle has a diameter of 14 cm. Find the length of its radius.
- 7) A circle has a radius of 5 cm. Find the length of its diameter.
- 8) **Tick the correct option:**
 - I. A triangle has two/three sides
 - II. A quadrilateral has three/four angles
 - III. A polygon is a closed/open figure.
 - IV. A circle is/is not a polygon
 - V. The diameter is the longest/shortest chord of a circle.
- 9) What is the diameter of a circle?
- 10) Draw concentric circles.
- 11) Draw circle of radii : 3cm , 5cm , 4.3cm , 1.3cm
- 12) Draw a circle of diameter: 10cm , 7cm , 5cm , 7cm

SANT NIRANKARI PUBLIC SCHOOL, TILAK NAGAR

ASSIGNMENT-5 (APRIL 2020-21)

CLASS-VI

MULTIPLICATION AND DIVISION

DAY-5

1) SOLVE :

$$\begin{array}{r} 5801 \\ \times \quad 297 \\ \hline \end{array}$$

$$\begin{array}{r} 7035 \\ \times \quad 322 \\ \hline \end{array}$$

$$\begin{array}{r} 5579 \\ \times \quad 347 \\ \hline \end{array}$$

$$\begin{array}{r} 4468 \\ \times \quad 372 \\ \hline \end{array}$$

$$\begin{array}{r} 6059 \\ \times \quad 555 \\ \hline \end{array}$$

$$\begin{array}{r} 7293 \\ \times \quad 580 \\ \hline \end{array}$$

$$9 \overline{)3348}$$

$$4 \overline{)2420}$$

$$5 \overline{)1380}$$

$$6 \overline{)3588}$$

$$7 \overline{)3430}$$

$$8 \overline{)5600}$$

$$\begin{array}{r} 5789 \\ \times \quad 287 \\ \hline \end{array}$$

$$\begin{array}{r} 7023 \\ \times \quad 312 \\ \hline \end{array}$$

$$\begin{array}{r} 5567 \\ \times \quad 337 \\ \hline \end{array}$$

$$\begin{array}{r} 4456 \\ \times \quad 362 \\ \hline \end{array}$$

$$\begin{array}{r} 6047 \\ \times \quad 545 \\ \hline \end{array}$$

$$\begin{array}{r} 7281 \\ \times \quad 570 \\ \hline \end{array}$$

$$9 \overline{)3303}$$

$$4 \overline{)2356}$$

$$5 \overline{)1135}$$

$$6 \overline{)3522}$$

$$7 \overline{)3339}$$

$$8 \overline{)5496}$$

SANT NIRANKARI PUBLIC SCHOOL, TILAK NAGAR
ASSIGNMENT-6 (APRIL 2020-21)
CLASS-VI
ADDITION AND SUBTRACTION
DAY-6

1. Add the following:

$\begin{array}{r} 111257 \\ + 66201 \\ \hline \hline \end{array}$	$\begin{array}{r} 123603 \\ + 78546 \\ \hline \hline \end{array}$	$\begin{array}{r} 135949 \\ + 90891 \\ \hline \hline \end{array}$	$\begin{array}{r} 148295 \\ + 103236 \\ \hline \hline \end{array}$
---	---	---	--

$\begin{array}{r} 136603 \\ + 91509 \\ \hline \hline \end{array}$	$\begin{array}{r} 148949 \\ + 103854 \\ \hline \hline \end{array}$	$\begin{array}{r} 161295 \\ + 116199 \\ \hline \hline \end{array}$	$\begin{array}{r} 173641 \\ + 128544 \\ \hline \hline \end{array}$
---	--	--	--

2. Subtract the following:

$\begin{array}{r} 111257 \\ - 66201 \\ \hline \hline \end{array}$	$\begin{array}{r} 123603 \\ - 78546 \\ \hline \hline \end{array}$	$\begin{array}{r} 135949 \\ - 90891 \\ \hline \hline \end{array}$	$\begin{array}{r} 148295 \\ - 103236 \\ \hline \hline \end{array}$
---	---	---	--

$\begin{array}{r} 136603 \\ - 91509 \\ \hline \hline \end{array}$	$\begin{array}{r} 148949 \\ - 103854 \\ \hline \hline \end{array}$	$\begin{array}{r} 161295 \\ - 116199 \\ \hline \hline \end{array}$	$\begin{array}{r} 173641 \\ - 128544 \\ \hline \hline \end{array}$
---	--	--	--

3) In an examination, 75,236 students passed and 14,892 students failed. Find how many students appeared for the examination.

4) There are 3,786 men, 3,672 women and 1,508 children in a village. Find the total population of the village.

5) In a school there are the following numbers of students: 127 in grade one, 120 in grade two, 110 in grade three, 100 in grade four and 93 in grade five. Find the total number of students in the school.

6) A man plucked 435 mangoes from one tree, 450 mangoes from the second tree and 295 mangoes from the third tree. Find the total number of mangoes plucked from the trees.

7) A school library has 3,730 books in French, 2,531 books in English, and 5,368 books in other languages. How many books are there in library?

8) There are 37,536 bags of wheat, 35,380 bags of rice and 25,240 bags of gram in a store. Find the total number of bags in the store.

9) A man plucked 375 apples from one tree, 504 apples from the second tree and 229 apples from the third tree. Find the total number of apples plucked from the trees.

10) A toy factory manufactured 52,253 toys in January, 50,375 toys in February and 608,368 toys in March. How many toys were manufactured in the above mentioned months in total?

11) How much smaller is 63512 than 94291?

12) Which is greater, 42929 or 91429 and by how much?

13) There are 63,675 bags of wheat and rice together in the grain stock. The wheat bags are counted as 34,768 in number. Find the number of rice bags.

SANT NIRANKARI PUBLIC SCHOOL, TILAK NAGAR

ASSIGNMENT-7 (APRIL 2020-21)

CLASS-VI

AREA AND PERIMETER

DAY-7

1) Fill in the blanks:-

- I. The perimeter of the triangle whose sides are 2 cm, 3 cm, 5 cm is _____.
 - II. The measurement of a distance around a closed figure is called _____.
 - III. Volume of a cuboid
= _____ × _____ × _____.
 - IV. The volume of a cube whose each side is 2 cm is _____.
 - V. The measure of a region is called its _____.
 - VI. The area of a rectangle is _____.
 - VII. The area of a square is _____.
 - VIII. If the side of a square is 2 cm, then its area is _____.
 - IX. A box is 5 cm long, 3 cm broad and 7 cm high. Its volume is _____.
 - X. If the side of a cube is 5 cm, then its volume is _____.
 - XI. If the area of a rectangle is 300 square cm and its length is 20 cm. then its breadth is _____.
 - XII. The perimeter of a square having each side 4 m long is _____.
- 2) Find the numbers of tiles to be laid in a square path of side 20 cm, if the side of each square tile is 5 cm.
- 3) Find the cost of painting a wall of length 60 m and breadth 12 m at the rate of 5 per sq m. The inner edge of a cubical tank measures 5 m each. What is its capacity? How much water does it hold when it is two-fifths full?
- 4) How many bricks of $l = 20\text{cm}$, $b = 8\text{cm}$, $h = 6\text{cm}$ will be made to build a wall of length = 10m, breadth = 8cm and height = 6cm?
- 5) Which has greater volume a cube of edge length 6cm or a cuboid whose length is 6 cm, breadth is 4cm and height is 8cm?
- 6) Find the perimeter of a rectangle whose sides are**
- I. 12cm and 9cm
 - II. 7m 50cm and 5m 25cm
 - III. 24m and 20m

7) Find the perimeter of a square whose each side is

- I. 20m
- II. 15m 20cm
- III. 18m 50cm

8) Find the area of the rectangle of sides

- I. 9mm and 7mm
- II. 60m and 27m
- III. 115cm and 40cm
- IV. 30m and 15m

9) Find the area of square of side

- I. 5mm
- II. 12cm
- III. 25cm
- IV. 4cm

SANT NIRANKARI PUBLIC SCHOOL, TILAK NAGAR

ASSIGNMENT-8 (APRIL 2020-21)

CLASS-VI

HCF AND LCM

DAY-8

1) Fill in the blank

- I. $7 \times 13 = 91$, so 91 is a _____ of 7 and 13
- II. $2 \times 3 \times 4 = 24$, so 2, 3, 4, 6, 8 and 12 are _____ of 24.
- III. 15 and 6 are factors of 90. So 90 is _____ by 15 and 6
- IV. Among 14, 27, 68, 103 and 2,004 _____ and _____ are odd numbers.
- V. Among 16, 43, 97, 409, 5,000 and 21,215, _____ and _____ are even numbers.
- VI. The third and fourth multiples of 16 are _____ and _____.
- VII. Four factors of 72 other than 1 and 72 are _____, _____, _____ and _____.

2) Find the common factor of the following

- I. 15, 30
- II. 21, 25
- III. 14, 24

3) Circle the prime number

13, 15, 27, 47, 33, 59, 49, 23

4) Circle the composite number

14, 24, 29, 37, 41, 47, 49, 36, 10

5) Find the L.C.M by prime factorization method

- I. 10, 16
- II. 200, 400, 600
- III. 5, 25, 40
- IV. 12, 36, 48

6) Find the L.C.M

- I. 54, 60
- II. 12, 20, 24
- III. 15, 60, 105

7) Find the HCF of by prime factorization method

- I. 45
- II. 60

- III. 90
- IV. 120
- V. 144
- VI. 2456
- VII. 728

8) The product of two numbers is 640. If one number is 20, find the other number.

9) Find the greatest number of 4 digits that is divisible by 27

10) **Write all the factors of these numbers.**

- I.60
- II.13
- III.21
- IV.72

SANT NIRANKARI PUBLIC SCHOOL, TILAK NAGAR

ASSIGNMENT-9 (APRIL 2020-21)

CLASS-VI

FRACTION

DAY-9

1) Write as fractions

I. 0.30

II. 2.49

III. 12.96

IV. 333.3

V. 81.07

VI. 13.5

2) Complete the following

I. $1.416.45 = 400 + \underline{\hspace{1cm}} + \underline{\hspace{1cm}} + \underline{\hspace{1cm}} + \underline{\hspace{1cm}}$

II. $7.72 = \underline{\hspace{1cm}} + 7/10 + \underline{\hspace{1cm}}/100$

III. $0.21 = 2/ \underline{\hspace{1cm}} + 1/ \underline{\hspace{1cm}}$

3) Add:

I. $\frac{2}{5} + \frac{9}{5}$

II. $\frac{34}{8} + \frac{67}{8}$

III. $\frac{1}{2} + \frac{4}{2}$

IV. $\frac{4}{6} + \frac{5}{6} + \frac{8}{6}$

4) Subtract

I. $\frac{27}{5} - \frac{13}{5}$

II. $\frac{89}{4} - \frac{56}{4}$

III. $\frac{23}{5} - \frac{2}{5} + \frac{7}{5}$

5) Write the numerator and denominator of followings:

I. $\frac{27}{56}$

II. $\frac{78}{98}$

III. $\frac{34}{76}$

IV. $\frac{23}{7}$

6) Write the fraction for followings:

I. seven- eighths

II. two-ninths

III. four -sixths

IV. one -ninths

7) Find first three equivalents of followings

I. $\frac{3}{8}$

II. $1\frac{1}{2}$

III. $\frac{3}{5}$

IV. $\frac{4}{9}$

8) Arrange in ascending order:

I. $\frac{6}{13}, \frac{9}{13}, \frac{3}{13}, \frac{17}{13}, \frac{13}{13}$

II. $\frac{5}{9}, \frac{6}{9}, \frac{3}{9}, \frac{1}{9}, \frac{5}{9}$

9) Arrange in descending order:

I. $\frac{8}{6}, \frac{5}{6}, \frac{7}{6}, \frac{2}{6}, \frac{8}{6}$

II. $\frac{1}{12}, \frac{34}{12}, \frac{79}{12}, \frac{899}{12}, \frac{23}{12}, \frac{45}{12}$

10) Write in words

I. 2.3

II. 4.566

III. 3456.890

IV. 23.67

11) Multiply

$\frac{1}{4} \times \frac{1}{4} = \square$

$\frac{3}{10} \times \frac{2}{6} = \square$

$6 \times \frac{3}{4} = \square = \square$

$8 \times \frac{1}{4} = \square$

$\frac{2}{5} \times \frac{5}{7} = \square$

$\frac{2}{5} \times \frac{5}{6} = \square$

$\frac{2}{5} \times \frac{2}{3} = \square$

$4 \times \frac{3}{16} = \square$

$\frac{3}{8} \times 10 = \square = \square$

$\frac{1}{3} \times 15 = \square$







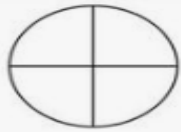
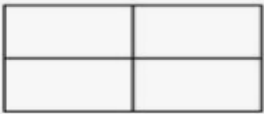

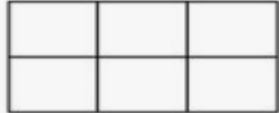


$\frac{5}{9} \times \frac{1}{5} = \square$

$\frac{3}{4} \times \frac{4}{9} = \square$

12) Compare

$\frac{5}{6} \bigcirc \frac{10}{12}$	$\frac{3}{10} \bigcirc \frac{7}{8}$	$\frac{5}{12} \bigcirc \frac{1}{2}$
$\frac{7}{8} \bigcirc \frac{3}{4}$	$\frac{1}{3} \bigcirc \frac{2}{8}$	$\frac{1}{4} \bigcirc \frac{2}{3}$
$\frac{7}{12} \bigcirc \frac{3}{4}$	$\frac{2}{3} \bigcirc \frac{2}{12}$	$\frac{3}{8} \bigcirc \frac{2}{3}$
$\frac{3}{4} \bigcirc \frac{1}{8}$	$\frac{2}{3} \bigcirc \frac{5}{12}$	$\frac{1}{2} \bigcirc \frac{3}{4}$
$\frac{7}{10} \bigcirc \frac{11}{12}$	$\frac{7}{12} \bigcirc \frac{4}{10}$	$\frac{5}{12} \bigcirc \frac{4}{5}$
$\frac{2}{6} \bigcirc \frac{3}{12}$	$\frac{8}{10} \bigcirc \frac{3}{4}$	$\frac{3}{8} \bigcirc \frac{11}{12}$
$\frac{2}{3} \bigcirc \frac{10}{12}$	$\frac{7}{8} \bigcirc \frac{1}{6}$	$\frac{3}{8} \bigcirc \frac{7}{8}$
$\frac{2}{4} \bigcirc \frac{4}{8}$	$\frac{6}{8} \bigcirc \frac{8}{12}$	$\frac{1}{3} \bigcirc \frac{4}{9}$

13) Color the following:

Color $\frac{1}{2}$			
Color $\frac{2}{3}$			
Color $\frac{3}{4}$			
Color $\frac{1}{2}$			

III. $9 + \frac{4}{1000} = \text{-----}$

IV. $10 + 8 + \frac{2}{10} = \text{-----}$

9) Write the decimal number:

I. $400 + 60 + 2 + \frac{9}{10} + \frac{5}{100} =$

II. $20 + 4 + \frac{3}{100} + \frac{8}{1000} =$

10) Write the following as decimals:

I. Two tenths

II. Four decimal three two one

SANT NIRANKARI PUBLIC SCHOOL
ASSIGNMENT-1(MONTH-APRIL)
Class - VI Science (Electricity and Circuits)

1. Combination of two or more cell in series is called
 - a. Dynamo
 - b. Transistor
 - c. Battery
 - d. Insulator
2. Filament of electric bulb is made up of
 - a. Tungsten
 - b. Iron
 - c. Copper
 - d. Aluminum
3. Which one is not a good conductor of electricity?
 - a. Copper
 - b. Silver
 - c. Plastic
 - d. Graphite
4. Closed and continues path of electric current is called
 - a. Resistance
 - b. Circuit
 - c. Connector
 - d. Insulator
5. Match the following
 - Column A
 - a. Conductor
 - b. Insulator
 - c. Resistor
 - d. Connector
 - e. Plug-key
 - Column B
 - i. Used to join battery and gadgets.
 - ii. Used to close and open the circuit.
 - iii. Through which current pass easily.
 - iv. Current does not pass at all.
 - v. Obstruct the flow of current.

6. Fill in the gaps with suitable words.
 - a. Combination of two or more cells is called -----.
 - b. A device used to break the electric circuit is known as-----.
 - c. Each cell has -----terminals.
 - d. is best conductor of electric current.
 - e. is a non- metal that conduct electricity.
7. Name any four devices in which electric cell are used.
8. What is electric circuit? What is the direction of current in the circuit?
9. Differentiate between conductor and insulator with example.
10. Name the following:
 - a. An electric gadget to break the electric circuit.
 - b. An alloy used to make filaments of a bulb.
 - c. A combination two or more cells.
 - d. The source of electricity.
 - e. The two terminals of a cell.

SANT NIRANKARI PUBLIC SCHOOL
ASSIGNMENT-2(MONTH-APRIL)
Class - VI Science (Electricity and Circuits)

1. A thin coil of metal, which glows when electricity is passed through it, is called
 - a. Switch
 - b. Insulator
 - c. Filament
 - d. Bulb
2. Which of these does not allow the current to pass through it?
 - a. Bakelite rod
 - b. Copper rod
 - c. Brass rod
 - d. Iron rod
3. Which of the appliances at your home does not run on electric current?
 - a. Air conditioner
 - b. Gas burner
 - c. Mixer grinder
 - d. Television
4. A device that prevents or allow the current to flow through it
 - a. Switch
 - b. Motor
 - c. Conductor
 - d. Terminal

5. Match the following

Column A

- a. Electric cell
- b. Electric bulb
- c. Metal wire
- d. Plastic string
- e. Terminals

Column B

- i. Positive and Negative ends of cell.
- ii. Bad conductor
- iii. Have two terminals.
- iv. Good conductor
- v. Have filaments.

6. Write T for true statement and F for false statements.
- Silver is a good conductor of electricity.
 - Filaments of bulb glows due to heating.
 - Electric current can pass through distilled water.
 - Cotton string can be used to complete the circuit.
 - Electricity is a form of energy.
7. What is the purpose of using electric switch in the circuit?
8. Why electrician uses rubber gloves while repairing a electric supply line?
9. What do you mean by fused bulb? Why fused bulb do not glows?
10. Will bulb glow in the circuit drawn below? If not explain why it will not glow?

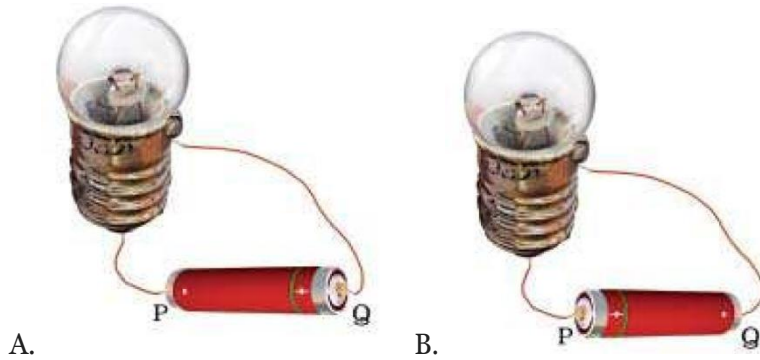


SANT NIRANKARI PUBLIC SCHOOL
ASSIGNMENT-3(MONTH-APRIL)
Class - VI Science (Electricity and Circuits)

1. An electric cell produces electricity from the
 - a. Charge stored in it.
 - b. Chemical stored in it.
 - c. Mechanical energy stored in it.
 - d. Kinetic energy stored in it.
2. Direction of electric current in the circuit is from
 - a. Negative to Positive terminals
 - b. Positive to the negative terminals
 - c. Negative to negative terminals
 - d. Positive to neutral terminals.
3. Which of the following is not an insulator?
 - a. Glass
 - b. Plastic
 - c. Graphite
 - d. Rubber
4. Inside the torch two or more cells are placed with
 - a. Positive - negative- positive-negative.
 - b. Positive- positive- negative- negative.
 - c. Negative- negative- positive - positive.
 - d. Negative - positive- positive- negative.
5. Match the column A with Column B.

<u>Column A</u>	<u>Column B</u>
a. Torch	i. to make lassy and spice paste.
b. Refrigerator	ii. to see picture and hear sound.
c. Mixer-grinder	iii. to get air.
d. Fan	iv. to get cold water and ice
e. Television	v. to get light.

6. Fill in the blanks with suitable word.
- Electric bulb has a -----that is connected to its terminals.
 - do not allow electric current to pass through them.
 - The bulb glows only when -----flows through the circuit.
 - Copper wire is a good----- of electricity.
 - Brightness of bulb depends on power ofbulb and ----- through them.
7. What is a power station? Name a few types of power stations.
8. What is different between insulator and conductors? Give suitable example.
9. The handles of screwdrivers and pliers used by electrician for repair have plastic or rubber covering. Why?
10. Find the direction of electric current in both the circuit if both bulbs are glowing.



SANT NIRANKARI PUBLIC SCHOOL
ASSIGNMENT-4(MONTH-APRIL)

Class - VI Science (Food: Where Does It Come From?)

1. Pulses are rich source of
 - a. Proteins
 - b. Carbohydrates
 - c. Fats
 - d. Vitamins
2. All organisms except green plants are called as
 - a. Autotrophs
 - b. Heterotrophs
 - c. Herbivores
 - d. Carnivores
3. Curd is formed by the action of
 - a. Fungus
 - b. Algae
 - c. Bacteria
 - d. Protozoa
4. Snake do not have
 - a. Tongue
 - b. Teeth
 - c. Mouth
 - d. Tail
5. Match the following

Column A	Column B
a. Carbohydrates	i. Ghee
b. Proteins	ii. Rice
c. Fat	iii. Fruits
d. Vitamins and minerals	iv. Maize
e. Roughage	v. Soybean

6. Select true/ false statement from the followings.
 - a. Snake do not have teeth.
 - b. Carnivores have blunt teeth.
 - c. Man is an example of omnivores.
 - d. All green plants are producers.
 - e. Cuscuta is a parasitic plant.

7. Name a plant that has two edible parts.

8. What are main sources of food?

9. Write the name of food following organisms eat:
 - a. Cow
 - b. Snake
 - c. Lion
 - d. Honey bee.

10. Arrange the following organisms as Carnivores, herbivores and omnivores.
 - a. Cat
 - b. Cow
 - c. Horse
 - d. Man
 - e. Tiger
 - f. Dog.

SANT NIRANKARI PUBLIC SCHOOL

ASSIGNMENT-5(MONTH-APRIL)

Class - VI Science (Food: Where Does It Come From?)

1. Green plants prepare their own food, hence they are called as
 - a. Autotrophs
 - b. Parasites
 - c. Heterotrophs
 - d. Decomposers
2. Pulses are rich source of
 - a. Fibre
 - b. Minerals
 - c. Roughages
 - d. Proteins
3. Spices provide
 - a. Energy
 - b. Flavour
 - c. Vitamins
 - d. Proteins
4. An animal that eats other animals is called
 - a. Producer
 - b. Carnivore
 - c. Omnivore
 - d. herbivore
5. Match the columns

Column A	Column B
a. Drinking milk	i. are animal products.
b. Vegetable, fruits	ii. is good for health.
c. Carrot, tomato, potato	iii. are rich in minerals and vitamins.
d. Egg, meat, paneer	iv. are vegetables.
e. Wheat, gram, rice	v. are plant products.

6. Fill in the blanks.
 - a. Tiger is a -----because it eats only flesh of other animals.
 - b. Main supply of eggs comes from----- and ----- --.
 - c. We are----- because we eat both plant and animal products.
 - d. Food is needed by living organisms for -----, -----and protection.
 - e. We get sugar from -----.

7. What are milch animals?

8. Why do we need food?

9. Why should we avoid wastage of food?

10. Given below are jumbled words which are names of parts of plant. Rearrange them to get the correct words.
 - a. TOOR
 - b. SEANBOYA
 - c. LFOER
 - d. ROUNDGNUT
 - e. ITRUF

SANT NIRANKARI PUBLIC SCHOOL
ASSIGNMENT-6(MONTH-APRIL)

Class - VI Science (Food: Where Does It Come From?)

1. Food:
 - a. Gives us energy
 - b. Help in growth
 - c. Repair body parts
 - d. All of these
2. is not a milk product.
 - a. Pizza
 - b. Curd
 - c. Cheese
 - d. Ice-cream
3. An example of complete food is
 - a. Carrot
 - b. Milk
 - c. Pulses
 - d. Fish
4. Honeybee makes honey from
 - a. Pollen
 - b. Petals
 - c. Nectar
 - d. Bud
5. Match the organisms in column A with product used as food by human in column B.

Column A	Column B
a. Goat	i. Leaves
b. Mustard plant	ii. Meat
c. Hen	iii. Seed
d. Cow	iv. Egg
e. Spinach	v. Milk

6. Select true/false(T/F) statements from the following.
 - a. Potato tubers contain carbohydrates.
 - b. Soyabean is a rich source of vitamins.
 - c. Milk is a complete food.
 - d. Vegetables and fruits gives vitamins and minerals
 - e. Glucose is the main source of energy in ourbody.

7. Give one words for following:
 - a. Animals that eat both plants and animals -----.
 - b. Animals that eat only meat-----.
 - c. Animals that eat only plants -----.

8. Why do organisms require food? Give two reasons.

9. Mention the part of plant that the following belong to:
 - a. Radish
 - b. Ginger
 - c. Cabbage
 - d. Potato
 - e. Spinach

10. Why should children take milk everyday?

SANT NIRANKARI PUBLIC SCHOOL

ASSIGNMENT-7(MONTH-APRIL)

Class - VI Science (Food: Where Does It Come From?)

1. Plants prepare their food by the process of
 - a. Transpiration
 - b. Photosynthesis
 - c. Respiration
 - d. Transportation
2. Cereals are rich source of
 - a. Carbohydrates
 - b. Fats
 - c. Proteins
 - d. Minerals
3. People living in coastal areas eat
 - a. Wheat pulses and rice.
 - b. Rice and fish
 - c. Rice, meat of goat
 - d. Maize and bajara
4. Carnivores have
 - a. Blunt teeth
 - b. Sharp, pointed teeth
 - c. Long sticky tongue
 - d. Broad and strong teeth
5. Match the following
 - Column A
 - a. Curd
 - b. Pulses
 - c. Honey
 - d. Meat
 - e. Egg
 - Column B
 - i. protein
 - ii. Highly nutritious food.
 - iii. hen
 - iv. milk
 - v. goat
6. Fill in the blanks with suitable word.
 - a. Snake does not have -----.
 - b. Scavengers feed on other -----.
 - c. South Indian use -----oil as medium of cooking.
 - d. Excess intake of food causes-----.
 - e. Animals that provide milk are called -----animals.
7. What do you mean by food habit?
8. What is the importance of spices for us?
9. Why food is essential for us?
10. name the main food item consumed in
 - a. Punjab
 - b. Gujarat
 - c. Kerala
 - d. West Bengal
 - e. Odhisha

SANT NIRANKARI PUBLIC SCHOOL

ASSIGNMENT-8(MONTH-APRIL)

Class - VI Science (Sorting Materials into groups)

1. The state of matter which has a definite volume but no definite shape
 - a. Solid
 - b. Liquid
 - c. Gas
 - d. Mixture
2. Classification is grouping of
 - a. Thing as living and non-living
 - b. All things living or non-living on the basis of their properties.
 - c. Living things only
 - d. Non-living things only
3. Perfume is a substance which is
 - a. Volatile
 - b. Non-volatile
 - c. Malleable
 - d. Sublime
4. If a substance can be beaten into thin sheet, it is called
 - a. Ductile
 - b. Malleable
 - c. Brittle
 - d. Good conductor
5. Match the following columns

<u>Column A</u>	<u>Column B</u>
a. Sugar	i. Soft
b. Ghee	ii. Hard
c. Diamond	iii. Rotting egg smell
d. Hydrogen sulphide	iv. Soluble
e. Sponge	v. Combustible liquid.

6. Fill in the blanks

- a. All metals are ----- of heat and electricity.
- b. Gold is -----.
- c. Petrol is ----- in water.
- d. Copper is ----- magnetic material.
- e. Chalk does not ----- in water.

7. Define malleability and ductility?

8. Why do metal's objects lose their luster after a while?

9. How are transparent objects different from opaque objects?

10. Classify the following object as metals, non-metal or compounds.

- a. Iron
- b. Gold
- c. Carbon
- d. Sodium chloride
- e. Oxygen
- f. Sodium
- g. Water
- h. Sulphur.

SANT NIRANKARI PUBLIC SCHOOL
ASSIGNMENT-9(MONTH-APRIL)
Class - VI Science (Sorting Materials into groups)

1. In which solution, iron nail lose its shine and appear dull?
 - a. Kerosene
 - b. Soft drink
 - c. Mustard
 - d. Coconut oil
2. Select the translucent materials from the following?
 - a. Glass tumbler
 - b. Mirror
 - c. Aluminium foil
 - d. Muslin cloth
3. Which among the following pair is commonly used for making safety pin?
 - a. Wood and glass
 - b. Plastic and glass
 - c. Leather and plastic
 - d. Steel and plastic
4. Which type of material is used to make wind screen of a car?
 - a. Transparent
 - b. Translucent
 - c. Opaque
 - d. All of these.
5. Match the following objects with materials used to make.

Column A	Column B
a. Note-book	i. Glass
b. Table	ii. Leather
c. Shoes	iii. Plastics
d. Toy	iv. Paper
e. Tumbler	v. Wood

6. Select true (T) and False (F) statements from the followings.

- a. Sugar dissolves in water.
- b. Stone is translucent.
- c. Metals are lustrous.
- d. Piece of wood float in water
- e. Oil mix with water.

7. What are soft and hard materials? Give example.

8. On what basis materials are grouped together?

9. What is solubility? Give two example of each soluble and insoluble in water?

10. Select the five materials from the word box, which is opaque.

O	S	T	P	L	E
A	T	L	E	E	R
C	O	I	N	A	A
O	N	K	C	F	S
A	E	E	I	W	E
L	L	Y	L	R	R

SANT NIRANKARI PUBLIC SCHOOL
ASSIGNMENT-10(MONTH-APRIL)
Class - VI Science (Sorting Materials into groups)

1. Which among the following materials are not lustrous
 - a. Diamond
 - b. Gold
 - c. Wood
 - d. Silver
2. Select odd from the following
 - a. Tawa
 - b. Eraser
 - c. Spade
 - d. Pressure cooker
3. Choose the opaque materials from the following
 - a. Clear water
 - b. Thin sheet of plastic
 - c. Wooden door
 - d. Glass container.
4. Which pair of substance float in water
 - a. Pin, oil drops
 - b. Coin, rubber band
 - c. Plastic ball, feather
 - d. Thermocol, Cotton thread.
5. Match the following

Column A	Column B
a. Solid	i. Copper
b. Liquid	ii. Air
c. Gas	iii. Copper sulphate
d. Element	iv. Brick
e. Compound	v. Water

6. Fill in the blanks with suitable word/ words.
 - a. Making orderly arrangement of materials is called -----.
 - b. Newspaper, a book, a copy, a diary are made up of -----.
 - c. Substances that can burn easily are called -----.
 - d. A substance that allow light to pass is called-----.
 - e. gas is highly combustible.

7. What are miscible and immiscible substances? Give example.

8. Write the expanded form of with uses.
 - a. CNG
 - b. LPG

9. What is volatility? Name some volatile substance.

10. Select the odd one out from the following and give reasons also.
 - a. Table, chair, baby, bed, cupboard
 - b. Rose, lotus, boat, jasmine
 - c. Iron, copper, silver, sand
 - d. Sugar, salt, copper sulphate, stone.

SANT NIRANKARI PUBLIC SCHOOL, TILAK NAGAR
ASSIGNMENT-1 (APRIL-2020-2021)
CLASS- VI
SUBJECT- SOCIAL SCIENCE
TOPIC: HISTORY:OUR PAST

Q1. Answer the following in one word.

- i. Who invaded India?
- ii. Who discovered sea route of India?
- iii. The study of coins is called as?
- iv. A person who studies the source materials analyses and records the events is called as?
- v. Who wrote books on Ayurveda?

Q2. Fill in the blanks.

- i. Secular literature is not corrected with _____.
- ii. Literary sources of history include _____ and _____ literature.
- iii. Abhijnanasakuntalam is the famous book written by _____.
- iv. The study of inscription is known as _____.
- v. _____ and _____ are the two names that we often use for our country.

Q3. Write true or false for the following statements.

- i. The study of inscriptions is called numismatics. ()
- ii. I _____ sing was a Chinese pilgrim. ()
- iii. Arthashastra by Kautilya is a Sanskrit drama. ()
- iv. Sanchi stupa is an example of a monument. ()
- v. The Angas were the religious literature of Buddhism. ()

Q4. Answer the following questions in brief.

- i. What are edicts?
- ii. Mention the type of information that coins provide.
- iii. What are the materials on which manuscripts were written?
- iv. What is archeology?

Q5. Answer the following question in detail.

- i. What are artefacts? What is their importance in understanding man's part?
- ii. Write a note on the secular literature of the Ancient period.
- iii. What are literary sources? How will you distinguish between the religious and secular literature?
- iv. India is the land of unity in diversity. Explain.

SANT NIRANKARI PUBLIC SCHOOL, TILAK NAGAR
ASSIGNMENT-2 (APRIL-2020-2021)
CLASS- VI
SUBJECT- SOCIAL SCIENCE
TOPIC: PREHISTORIC MAN

Q1. Fill in the blanks.

- i. Bhimbetka is in _____.
- ii. The invention of wheel helped in _____.
- iii. Early man used tools made of _____.
- iv. Fire was discovered towards the end of _____ age.
- v. Paleolithic tools were of _____ types.

Q2. Write true or false for the following statements.

- i. Stone Age is divided into periods on the basis of tools used by early man. ()
- ii. Early man ate raw meat. ()
- iii. Paleolithic people lived in large groups. ()
- iv. Early man of Paleolithic Age had settled life. ()

Q3. Define.

- i. Domestication
- ii. Animal husbandry
- iii. Motif
- iv. Megalith
- v. Borer

Q4. Answer the following questions in brief.

- i. Where is Hungsi situated?
- ii. How did the ability to stand erect help the first man-like creature?
- iii. Why is the Paleolithic man called hunter gatherer?
- iv. What is meant by the term food gatherer?
- v. What were hand axes used for?

Q5. Answer the following questions in detail.

- i. What was man's first major discovery? Mention its different uses.
- ii. What were the religious beliefs of early man?
- iii. How did early man discover fire? How did it benefit him?
- iv. How did Paleolithic man form groups? Describe life within such groups.

SANT NIRANKARI PUBLIC SCHOOL, TILAK NAGAR
ASSIGNMENT-3 (APRIL-2020-2021)
CLASS- VI
SUBJECT- SOCIAL SCIENCE

TOPIC: THE GLOBE : LATITUDES AND LONGTITUDES

Q1. Fill in the blanks.

- i. Local time of a place is that time when the sun is exactly _____ that meridian.
- ii. The Tropic of Capricorn lies in the _____ hemisphere.
- iii. The Arctic circle is located in the _____ hemisphere.
- iv. The standard meridian of India is _____.

Q2. Choose the correct answer.

- i. Frigid Zone is at
 - a. North Pole
 - b. South Pole
 - c. Both the poles
- ii. How many lines of meridian are in each hemisphere?
 - a. 180
 - b. 10
 - c. 1800
- iii. Number of time zones in which the world is divided-
 - a. 24
 - b. 23
 - c. 66
- iv. Indian Standard Time is fixed according to the meridian passing through-
 - a. Allahabad
 - b. Varanasi
 - c. Kashi

Q3. Define:

- i. Longitude
- ii. Latitude
- iii. Prime Meridian
- iv. Equator

Q4. Answer the following questions in brief.

- i. Name two countries that have many time zones.
- ii. What is local time?
- iii. Name the three heat zones of the Earth.
- iv. What is the significance of the Earth's grid?

Q5. Answer the following question in detail.

- i. What is the true shape of the Earth?
- ii. Describe the heat zones of the Earth.
- iii. What do you mean by meridians of longitude?
- iv. Distinguish between local time and standard time.
- v. What is meant by parallels of latitude?

SANT NIRANKARI PUBLIC SCHOOL, TILAK NAGAR
ASSIGNMENT-4 (APRIL-2020-2021)
CLASS- VI
SUBJECT- SOCIAL SCIENCE
TOPIC: KEY ELEMENTS OF A DEMOCRATIC GOVERNMENT

Q1. Fill in the blanks.

- i. India has a _____ form of government.
- ii. In India, the term of government is for _____ years.
- iii. Untouchability is now banned by _____.
- iv. _____ can become a source of conflict between states.
- v. Mettur dam is in the state of _____.

Q2. Match the following.

- | | |
|----------------------------------|--------------------|
| i. Universal adult franchise | a. Democracy |
| ii. Strikes | b. Dr B.R.Ambedkar |
| iii. Constitution of our country | c. 18 years |
| iv. Participation of people | d. Protest |

Q3. Define.

- i. Equality
- ii. Sanction
- iii. Commitment
- iv. Inevitable

Q4. Answer the following question in brief.

- i. What are the ways of people's protest against the government policies and decision?
- ii. In what way the government helps us to resolve the disputes?
- iii. If you are living in the city of Bengaluru, from where are you getting your water supply?
- iv. Name one social reformer who worked towards equality of all human beings.
- v. What do you mean by apartheid?

Q5. Answer the following questions in detail.

- i. What are the key elements of a democratic government?
- ii. What do you understand by gender bias?
- iii. Discuss about the concepts of the equality among all human beings.
- iv. How does government's accountability towards the countrymen effect it's working?

SANT NIRANKARI PUBLIC SCHOOL, TILAK NAGAR
ASSIGNMENT-5 (APRIL-2020-2021)
CLASS- VI
SUBJECT- SOCIAL SCIENCE
TOPIC- OUR EARTH IN THE SOLAR SYSTEM

Q1.. Fill in the blanks.

- i. Our Solar System is a part of _____ galaxy.
- ii. The brightest star in the saptarishi is _____.
- iii. The word 'planet' is derived from Greek word _____.
- iv. The plane having rings around it is _____.
- v. Planets which rotate from west to east is _____.
- vi. Nearest planet to the sun is _____.

Q2.. Define the following.

- i. Constellation
- ii. Stars
- iii. Asteroids
- iv. Planet
- v. Satellite

Q3. Answer in one word or one sentence.

- i. How long does it take to go from a new moon to a full moon?
- ii. Name few dwarf planets.
- iii. Which is the third nearest planet to the sun?
- iv. Which is the closest celestial body to our earth?
- v. Name the natural satellite of the earth.

Q4. Answer in brief.

- i. What cast shadow on the moon?
- ii. How can we locate the position of the pole star?
- iii. From where does the earth receive heat and light?
- iv. Why do we see only one side of the moon always?
- v. What is a comet? Give an example.

Q5. Answer the following questions in detail.

- i. Write about human-made satellite.
- ii. Despite being our nearest star, the tremendous heat of the sun is not felt so much. Why?
- iii. Write in brief about all eight planets of our solar system.
- iv. Why is Venus considered as Earth's twin?
- v. How would the Earth be affected if it is (a) too near or (b) too far from the sun?

SANT NIRANKARI PUBLIC SCHOOL, TILAK NAGAR
ASSIGNMENT-6 (APRIL-2020-2021)
CLASS- VI
SUBJECT- SOCIAL SCIENCE
TOPIC- DIVERSITY IN INDIA

Q1.. Fill in the blanks.

- i. Kerala is well known for its _____.
- ii. Ladakh's specialty is _____.
- iii. The boat race is an important part of _____ festival.
- iv. Both Kerala and Ladakh region were influenced by _____ and _____.
- v. Ladakh is also called as _____.

Q2.. Define the following.

- i. Diversity
- ii. Political inequality
- iii. Communalism
- iv. Backwaters
- v. Famine

Q3. Write true or false for the following statements.

- i. In India, we have 22 languages. ()
- ii. Our present social structure is based on occupations. ()
- iii. Women have no right over parental property. ()
- iv. Phiran is a loose upper dress worn by inhabitants of Kashmir. ()

Q4. Answer the following.

- i. Discuss the trade relations of Ladakh with Tibet.
- ii. Explain the theme of the book "The Discovery of India".
- iii. Mention any two popular costumes of Ladakh.
- iv. Discuss the economy of Ladakh.
- v. What does Diversity add to our lives?

Q5.. Give reason for the following.

- i. India's diversity has always been recognised as a source of its strength .
- ii. India is called a secular state.
- iii. Pashmina shawls are expensive.
- iv. Ladakh was considered to be a good trade route for the ancient traders from China and Europe.
- v. People travelled from one part of the world to another.

SANT NIRANKARI PUBLIC SCHOOL, TILAK NAGAR
ASSIGNMENT-7 (APRIL-2020-2021)

CLASS- VI

SUBJECT- SOCIAL SCIENCE

TOPIC- INDIA : CLIMATE, VEGETATION AND WILDLIFE

Q1. Fill in the blanks.

- i. The monsoon retreats from India during the month of _____.
- ii. _____ are also called monsoon forests.
- iii. Peninsula is covered by water from _____ sides.
- iv. The common variety of tree of thorn forests is _____.
- v. The _____ is or national bird.

Q2. Write True or False for the following statements.

- i. Coastal areas enjoy equable climate. ()
- ii. The Forest Research Institute is located at Pune. ()
- iii. During hot weather season, the temperature starts rising from south to north. ()
- iv. Over the plains, vegetation changes according to the amount of rainfall. ()
- v. The snowline in Himalayas is found at an altitude of 3500 metres. ()

Q3. Define:

- i. Saline
- ii. Swamp
- iii. Intense
- iv. Scanty
- v. Precipitation

Q4. Distinguish between the following:

- i. Coniferous and deciduous vegetation
- ii. Equable and extreme climate
- iii. Weather and seasons

Q5. Answer the following questions in brief.

- i. Name the four main seasons of India.
- ii. What is a biosphere reserve?
- iii. Name two important species belonging to tropical deciduous forests.
- iv. How are wildlife sanctuaries helpful?
- v. Where are tropical rainforests found in India?

SANT NIRANKARI PUBLIC SCHOOL, TILAK NAGAR
ASSIGNMENT-8 (APRIL-2020-2021)
CLASS- VI
SUBJECT- SOCIAL SCIENCE
TOPIC- NEW RELIGIOUS IDEAS

Q1. Fill in the blanks.

- i. Mahavira preached in _____ language.
- ii. Upanishads literally means _____.
- iii. Gautam Buddha was born at _____.
- iv. Mahavira was the _____ Tirthankar.
- v. Monks and nuns lived in monasteries called _____.

Q2. Write True or False for the following statements.

- i. Hinayana Buddhism considered Buddha as a religious leader. ()
- ii. Buddha attained enlightenment at Kapilvastu. ()
- iii. Mahavira passed away at Pavapuri. ()
- iv. Buddhism encouraged animal sacrifice. ()

Q3. Match the following.

- | | |
|--------------------------------|---------------------------------|
| i. Upanishad means | a. Kushinagar |
| ii. Mahavira got Niravana at | b. Viharas |
| iii. Monasteries were known as | c. Approaching and sitting near |
| iv. Buddha passed away at | d. Rajgriha |

Q4. Answer the following questions in brief.

- i. Why is Sarnath important to Buddhist followers?
- ii. Who was Satyakama Jabala?
- iii. What are Stupas?
- iv. Where was Gautam Buddha Born? Where did he attain enlightenment?

Q5. Answer the following questions in detail.

- i. Explain the main teachings of Lord Buddha.
- ii. What was the Buddhist Sangha?
- iii. Discuss the reasons which resulted in the rise of new religious ideas in the 6th century BCE.
- iv. Bring out the similarities in the teachings of Jainism and Buddhism.

SANT NIRANKARI PUBLIC SCHOOL, TILAK NAGAR
ASSIGNMENT-9 (APRIL-2020-2021)
CLASS- VI
SUBJECT- SOCIAL SCIENCE
TOPIC - RURAL LIVELIHOOD

Q1. Choose the correct answer.

- i. Postal services fall into this category of occupation-
 - a. The Primary
 - b. Tertiary
- ii. farmers with land holding between 2 to 5 hectares are-
 - a. Small farmers
 - b. Medium farmers
- iii. Cattle farming falls under the category-
 - a. Primary occupation
 - b. Secondary occupation
- iv. A chemical to destroy pests and fungus-
 - a. Pesticide
 - b. Migration

Q2. Fill in the blanks.

- i. People engaged in farming activity but having no land are called _____.
- ii. Rich farmers pay to the people working in their fields in forms of wages and _____.
- iii. Converting the raw material into a thing of utility for people is a _____ kind of occupation.
- iv. Human beings were called _____ in primitive times as they wandered from place to place.

Q3. Define-

- i. Migration
- ii. Occupation
- iii. Subsistence farming
- iv. Unemployment

Q4. Answer the following questions in brief.

- i. Name at least five non-farm occupations of people of a village.
- ii. How many kinds of farmers are there and what is the basis of this division?
- iii. Write down names of at least five sectors of occupations of residents of a city.
- iv. Which is the poorest category of people in the village engaged in farming?

Q5. Answer the following questions in detail.

- i. What are the three broad categories in which occupations can be divided? Explain each one by giving examples.
- ii. What do you think is the main cause of farmer's suicide? What measures can government take to stop this?

- iii. A lot of rural population migrate towards cities. What are the reason behind it? What steps can be taken to minimize this migration?
- iv. Which sector of services can be helpful in improving the lot of village poor people and how?

SANT NIRANKARI PUBLIC SCHOOL, TILAK NAGAR
ASSIGNMENT-10 (APRIL-2020-2021)
CLASS- VI
SUBJECT- SOCIAL SCIENCE
TOPIC – DOMAINS OF EARTH

Q1. Fill in the blanks.

- i. Tropic of cancer passes through _____.
- ii. _____ Canal separates Africa from Asia.
- iii. _____ is the gas which helps plants in photosynthesis.
- iv. Moving air is called _____.
- v. The deepest point on the Earth is _____ in the Pacific Ocean.

Q2. Give one word from the following.

- i. The ocean whose shape resembles with letter “S”.
- ii. Which is the largest continent.
- iii. The blanket of air surrounding the Earth is known as?
- iv. Where is Sahara desert located?
- v. Name the ocean which is circular in shape.

Q3. Write true or false for the following statement.

- i. Cloud formation and rainfall take place in Stratosphere. ()
- ii. The solid portion of Earth on which we live is called Hydrosphere. ()
- iii. Australia is the smallest continent. ()
- iv. Europe is sometimes called the Peninsula of Asia. ()
- v. Water in all it's forms on Earth accounts for 71% of Earth's crust. ()

Q4. Answer the following questions in brief.

- i. Which two gases are abundant in atmosphere?
- ii. Name two continents which spread on both sides of the equator.
- iii. What is meant by lithosphere?
- iv. What is the chief characteristic of biosphere?
- v. What do you mean by Global Warming?

Q5. Answer the following questions in detail.

- i. Why is the Earth called Blue Planet?
- ii. Discuss the importance of biosphere.
- iii. Describe the composition and significance of atmosphere.
- iv. Distinguish between Continents and Oceans.
- v. Make a colourful diagram of biosphere.